


Name : _____

Number Line Addition

3addends-tenth: S2

Indicate hops on each number line and complete the addition sentences.

1) $2.2 + 0.2 + 0.5 =$ _____



2) $7.8 + 1 + 0.5 =$ _____




3) $1.8 + 2 + 4 =$ _____



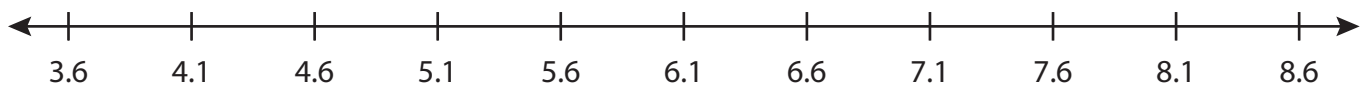
4) $13 + 0.3 + 0.6 =$ _____



5) $6.6 + 1 + 0.4 =$ _____



6) $4.1 + 2.5 + 1 =$ _____



PREVIEW

Gain complete access to the largest collection of worksheets in all subjects!

Members, please log in to download this worksheet.

Not a member? Please sign up to gain complete access.

www.mathworksheets4kids.com

Name : _____

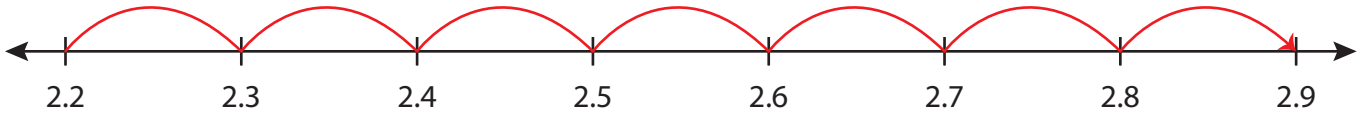
Answer key

Number Line Addition

3addends-tenth: S2

Indicate hops on each number line and complete the addition sentences.

1) $2.2 + 0.2 + 0.5 = \underline{2.9}$



2) $7.8 + 1 + 0.5 = \underline{9.3}$



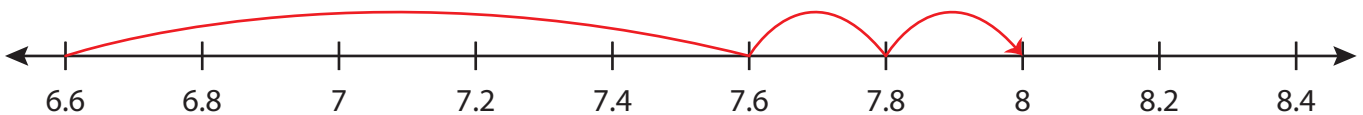
3) $1.8 + 2 + 4 =$



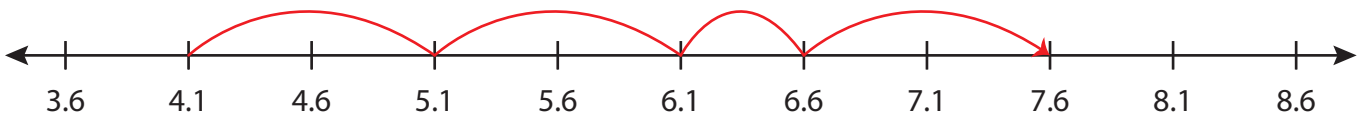
4) $13 + 0.3 + 0.6 =$



5) $6.6 + 1 + 0.4 =$



6) $4.1 + 2.5 + 1 = \underline{7.6}$



PREVIEW

Gain complete access to the largest collection of worksheets in all subjects!

Members, please log in to download this worksheet.

Not a member? Please sign up to gain complete access.

www.mathworksheets4kids.com