

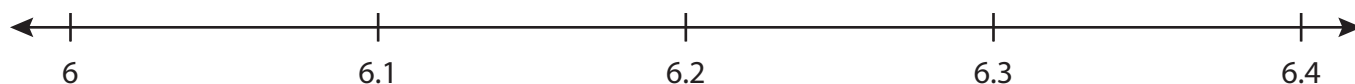
Name : _____

Number Line Addition

3addends-tenth: S3

Indicate hops on each number line and complete the addition sentences.

1) $6 + 0.1 + 0.3 = \underline{\hspace{2cm}}$



2) $9.5 + 3 + 2 = \underline{\hspace{2cm}}$




3) $3.2 + 2.5 + 1 = \underline{\hspace{2cm}}$



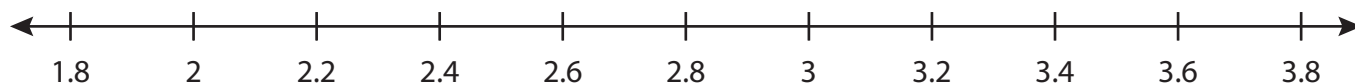
4) $14.3 + 0.2 + 0.1 = \underline{\hspace{2cm}}$



5) $8.6 + 2 + 0.5 = \underline{\hspace{2cm}}$



6) $2 + 1 + 0.6 = \underline{\hspace{2cm}}$



PREVIEW

Gain complete access to the largest collection of worksheets in all subjects!

Members, please log in to download this worksheet.

Not a member? Please sign up to gain complete access.

www.mathworksheets4kids.com

Name : _____

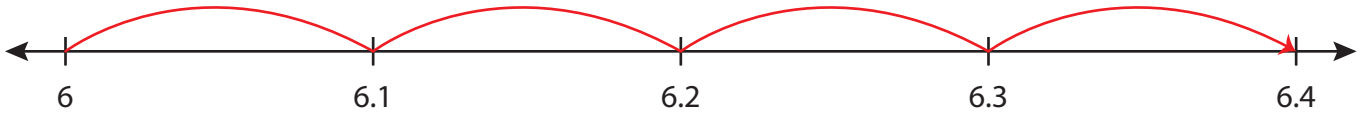
Answer key

Number Line Addition

3addends-tenth: S3

Indicate hops on each number line and complete the addition sentences.

1) $6 + 0.1 + 0.3 = \underline{6.4}$



2) $9.5 + 3 + 2 = \underline{14.5}$



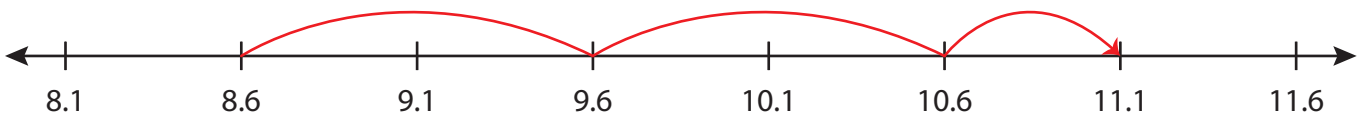
3) $3.2 + 2.5 + 1 =$ _____



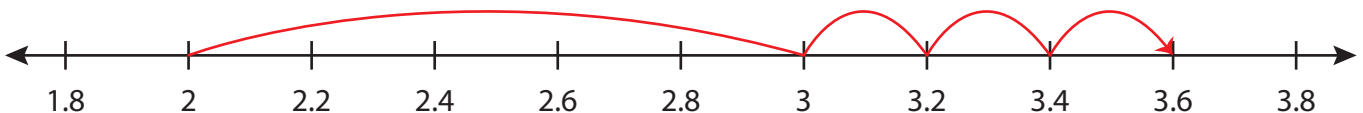
4) $14.3 + 0.2 + 0.1 =$ _____



5) $8.6 + 2 + 0.5 =$ _____



6) $2 + 1 + 0.6 = \underline{3.6}$



PREVIEW

Gain complete access to the largest collection of worksheets in all subjects!

Members, please log in to download this worksheet.

Not a member? Please sign up to gain complete access.

www.mathworksheets4kids.com