

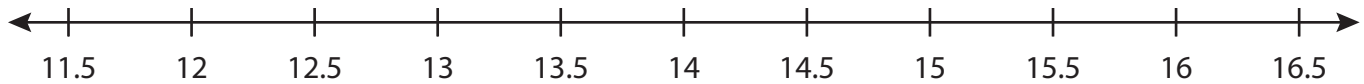
Name : _____

Number Line Addition

3addends-tenth: S4

Indicate hops on each number line and complete the addition sentences.

1) $12 + 2.5 + 2 =$ _____



2) $1 + 0.3 + 0.9 =$ _____



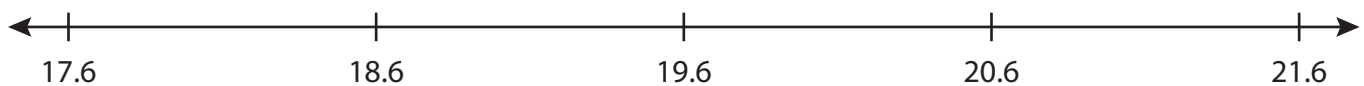
3) $9.4 + 0.2 + 1 =$ _____



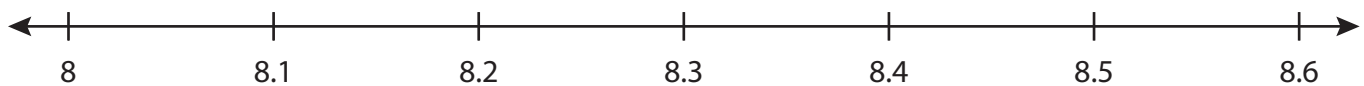
4) $4.5 + 3 + 0.5 =$ _____



5) $17.6 + 1 + 3 =$ _____



6) $8 + 0.1 + 0.3 =$ _____



PREVIEW

Gain complete access to the largest collection of worksheets in all subjects!

Members, please log in to download this worksheet.

Not a member? Please sign up to gain complete access.

www.mathworksheets4kids.com

Name : _____

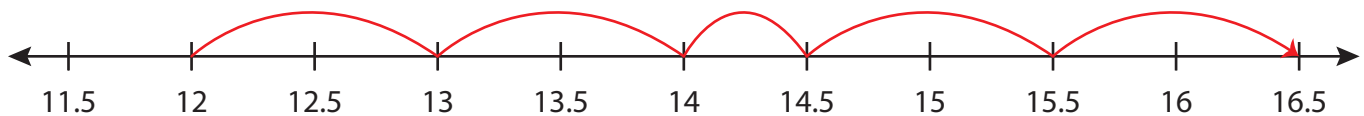
Answer key

Number Line Addition

3addends-tenth: S4

Indicate hops on each number line and complete the addition sentences.

1) $12 + 2.5 + 2 = \underline{16.5}$



2) $1 + 0.3 + 0.9 = \underline{2.2}$



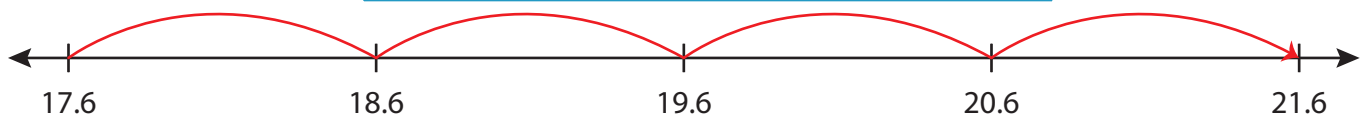
3) $9.4 + 0.2 + 1 = \underline{10.6}$



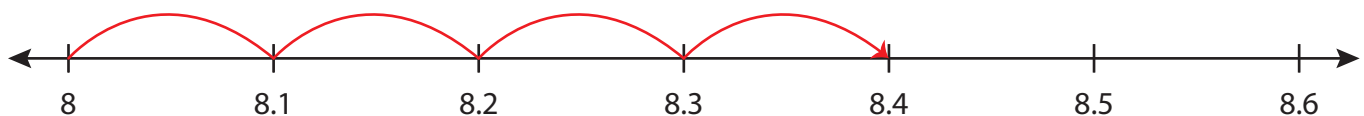
4) $4.5 + 3 + 0.5 = \underline{8.0}$



5) $17.6 + 1 + 3 = \underline{21.6}$



6) $8 + 0.1 + 0.3 = \underline{8.4}$



PREVIEW

Gain complete access to the largest collection of worksheets in all subjects!

Members, please log in to download this worksheet.

Not a member? Please sign up to gain complete access.

www.mathworksheets4kids.com