

Name : \_\_\_\_\_

## Number Line Addition

3addends-tenth: S5

Indicate hops on each number line and complete the addition sentences.

1)  $7.9 + 0.4 + 0.4 =$  \_\_\_\_\_



2)  $11 + 0.2 + 1 =$  \_\_\_\_\_



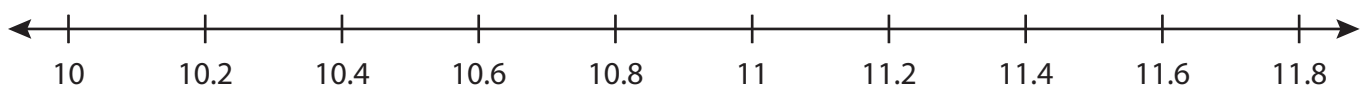
3)  $15.1 + 1 + 0.1 =$  \_\_\_\_\_



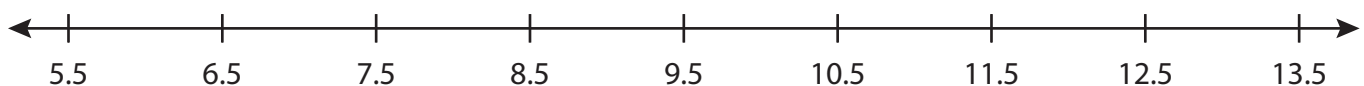
4)  $2.9 + 1.5 + 2 =$  \_\_\_\_\_



5)  $10 + 1 + 0.6 =$  \_\_\_\_\_



6)  $6.5 + 2 + 3 =$  \_\_\_\_\_



# PREVIEW

Gain complete access to the largest collection of worksheets in all subjects!

Members, please log in to download this worksheet.

Not a member? Please sign up to gain complete access.

[www.mathworksheets4kids.com](http://www.mathworksheets4kids.com)

Name : \_\_\_\_\_


## Answer key

### Number Line Addition

3addends-tenth: S5

Indicate hops on each number line and complete the addition sentences.

1)  $7.9 + 0.4 + 0.4 = \underline{8.7}$



2)  $11 + 0.2 + 1 = \underline{12.2}$




3)  $15.1 + 1 + 0.1 =$



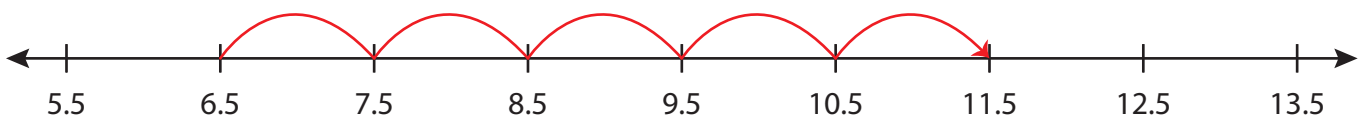
4)  $2.9 + 1.5 + 2 =$



5)  $10 + 1 + 0.6 =$



6)  $6.5 + 2 + 3 = \underline{11.5}$



**PREVIEW**

Gain complete access to the largest collection of worksheets in all subjects!

Members, please log in to download this worksheet.

Not a member? Please sign up to gain complete access.

[www.mathworksheets4kids.com](http://www.mathworksheets4kids.com)