

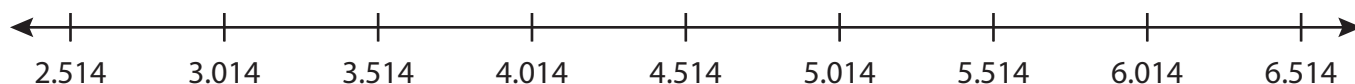
Name : \_\_\_\_\_

## Number Line Addition

3addends-thousandth: S1

Indicate hops on each number line and complete the addition sentences.

1)  $2.514 + 2.5 + 1 = \underline{\hspace{2cm}}$



2)  $10.145 + 1 + 2 = \underline{\hspace{2cm}}$




3)  $5.992 + 0.217 + \dots = \underline{\hspace{2cm}}$




4)  $7.251 + 1 + 0.2 = \underline{\hspace{2cm}}$



5)  $4.528 + 0.118 + 0.002 = \underline{\hspace{2cm}}$



6)  $3 + 1 + 0.125 = \underline{\hspace{2cm}}$



**PREVIEW**

Gain complete access to the largest collection of worksheets in all subjects!

Members, please log in to download this worksheet.

Not a member? Please sign up to gain complete access.

[www.mathworksheets4kids.com](http://www.mathworksheets4kids.com)

Name : \_\_\_\_\_

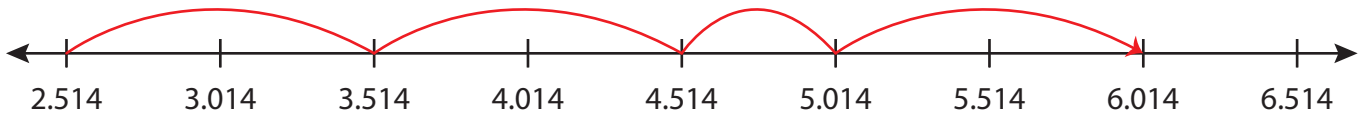
## Answer key

### Number Line Addition

3addends-thousandth: S1

Indicate hops on each number line and complete the addition sentences.

1)  $2.514 + 2.5 + 1 = \underline{6.014}$



2)  $10.145 + 1 + 2 = \underline{13.145}$



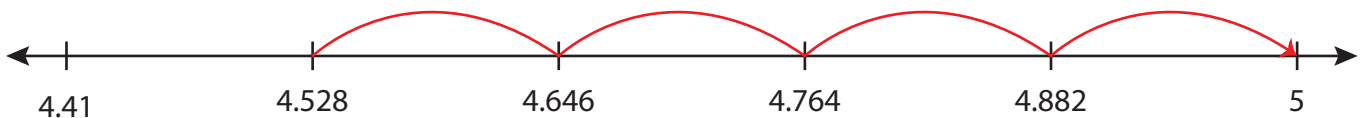
3)  $5.992 + 0.217 +$




4)  $7.251 + 1 + 0$



5)  $4.528 + 0.118 +$



6)  $3 + 1 + 0.125 = \underline{4.125}$



**PREVIEW**

Gain complete access to the largest collection of worksheets in all subjects!

Members, please log in to download this worksheet.

Not a member? Please sign up to gain complete access.

[www.mathworksheets4kids.com](http://www.mathworksheets4kids.com)