

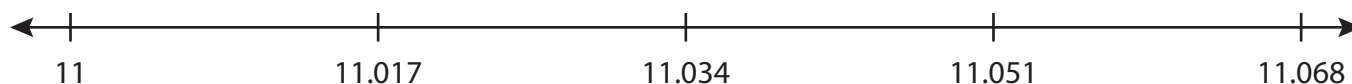
Name : _____

Number Line Addition

3 addends-thousandth: S2

Indicate hops on each number line and complete the addition sentences.

1) $11 + 0.051 + 0.017 = \underline{\hspace{2cm}}$



2) $3.828 + 1 + 0.5 = \underline{\hspace{2cm}}$




3) $7.021 + 0.75 = \underline{\hspace{2cm}}$



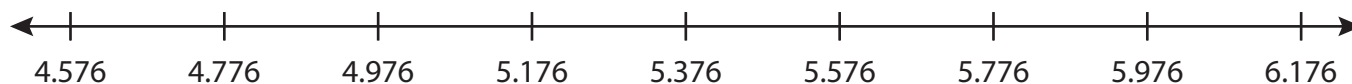
4) $5.058 + 2 + \underline{\hspace{1cm}} = \underline{\hspace{2cm}}$



5) $0.33 + 0.588 + \underline{\hspace{1cm}} = \underline{\hspace{2cm}}$



6) $4.776 + 1 + 0.4 = \underline{\hspace{2cm}}$



PREVIEW

Gain complete access to the largest collection of worksheets in all subjects!

Members, please log in to download this worksheet.

Not a member? Please sign up to gain complete access.

www.mathworksheets4kids.com

Name : _____

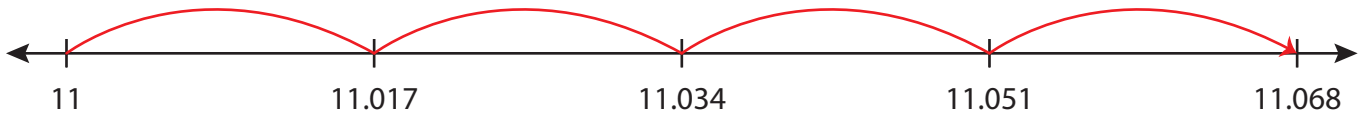
Answer key

Number Line Addition

3 addends-thousandth: S2

Indicate hops on each number line and complete the addition sentences.

1) $11 + 0.051 + 0.017 = \underline{11.068}$



2) $3.828 + 1 + 0.5 = \underline{5.328}$



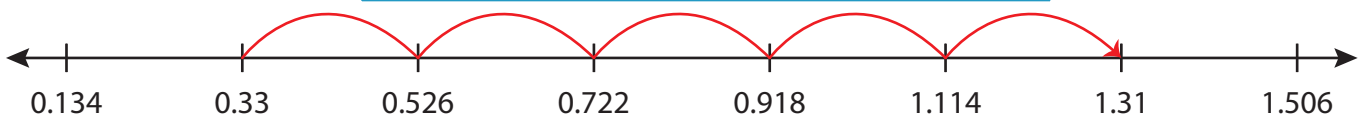
3) $7.021 + 0.75 =$



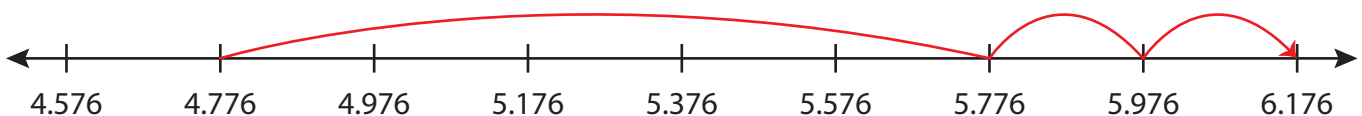
4) $5.058 + 2 +$



5) $0.33 + 0.588 +$



6) $4.776 + 1 + 0.4 = \underline{6.176}$



PREVIEW

Gain complete access to the largest collection of worksheets in all subjects!

Members, please log in to download this worksheet.

Not a member? Please sign up to gain complete access.

www.mathworksheets4kids.com