


Name : _____

Number Line Addition

3addends-thousandth: S3

Indicate hops on each number line and complete the addition sentences.

1) $8.365 + 1 + 0.25 = \underline{\hspace{2cm}}$



2) $14 + 0.618 + 0.412 = \underline{\hspace{2cm}}$



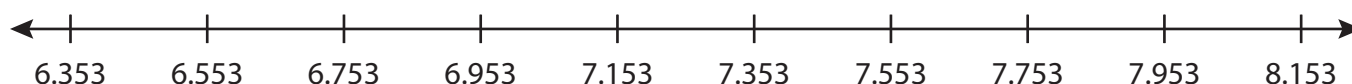
3) $4.021 + 1.5 + \dots = \underline{\hspace{2cm}}$




4) $9.137 + 0.642 + \dots = \underline{\hspace{2cm}}$



5) $6.753 + 1 + \dots = \underline{\hspace{2cm}}$



6) $2.498 + 2 + 3 = \underline{\hspace{2cm}}$



PREVIEW

Gain complete access to the largest collection of worksheets in all subjects!

Members, please log in to download this worksheet.

Not a member? Please sign up to gain complete access.

www.mathworksheets4kids.com

Name : _____

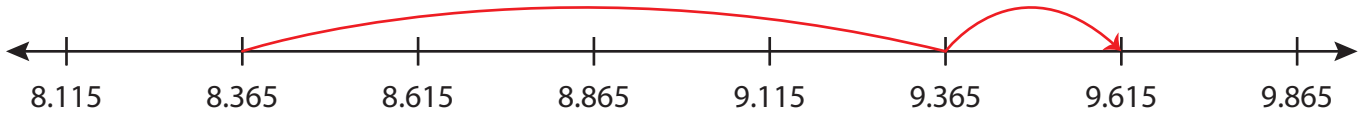
Answer key

Number Line Addition

3 addends-thousandth: S3

Indicate hops on each number line and complete the addition sentences.

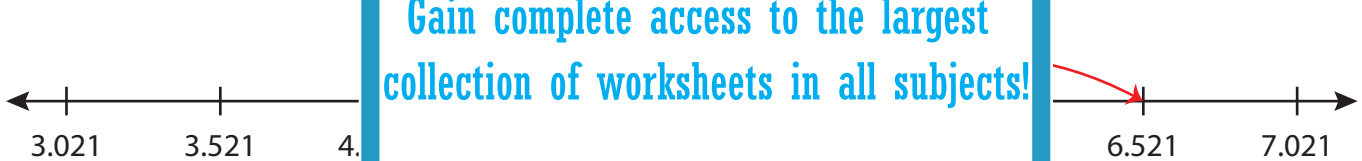
1) $8.365 + 1 + 0.25 = \underline{9.615}$



2) $14 + 0.618 + 0.412 = \underline{15.03}$



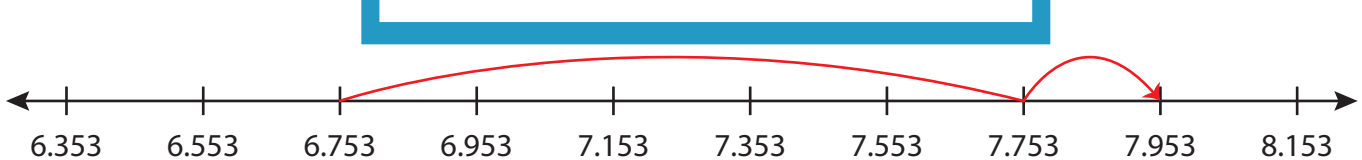
3) $4.021 + 1.5 + 0.999 = \underline{6.521}$



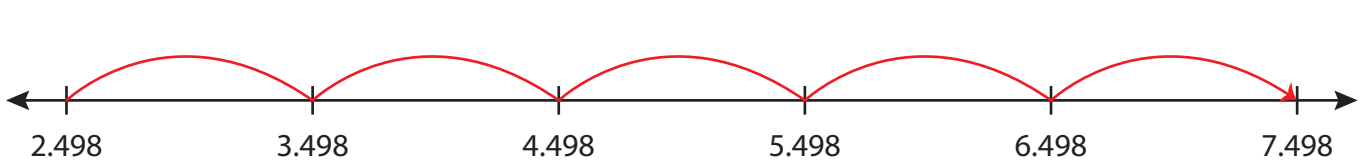
4) $9.137 + 0.642 + 0.642 = \underline{10.421}$



5) $6.753 + 1 + 0.195 = \underline{7.948}$



6) $2.498 + 2 + 3 = \underline{7.498}$



PREVIEW

Gain complete access to the largest collection of worksheets in all subjects!

Members, please log in to download this worksheet.

Not a member? Please sign up to gain complete access.

www.mathworksheets4kids.com