

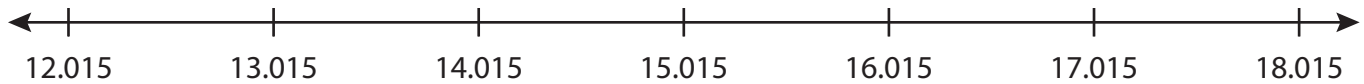
Name : \_\_\_\_\_

## Number Line Addition

3 addends-thousandth: S4

Indicate hops on each number line and complete the addition sentences.

1)  $12.015 + 3 + 2 = \underline{\hspace{2cm}}$



2)  $7.227 + 0.045 + 0.018 = \underline{\hspace{2cm}}$



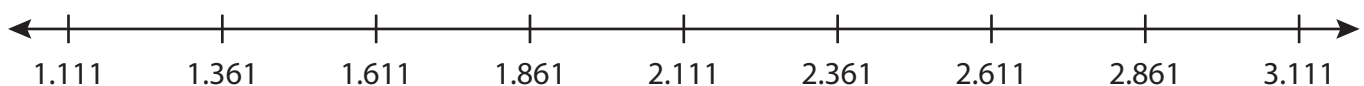
3)  $11.012 + 0.2 + \underline{\hspace{1cm}}$



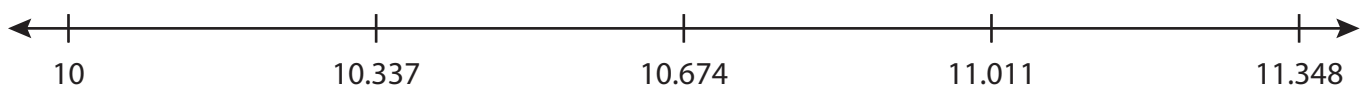
4)  $4.414 + 1 + \underline{\hspace{1cm}}$



5)  $1.361 + 0.75 = \underline{\hspace{2cm}}$



6)  $10 + 0.337 + 0.337 = \underline{\hspace{2cm}}$



**PREVIEW**

Gain complete access to the largest collection of worksheets in all subjects!

Members, please log in to download this worksheet.

Not a member? Please sign up to gain complete access.

[www.mathworksheets4kids.com](http://www.mathworksheets4kids.com)

Name : \_\_\_\_\_

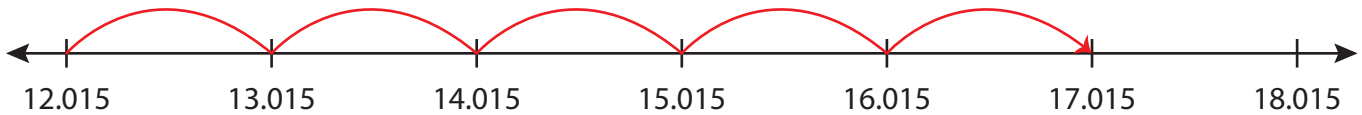
## Answer key

### Number Line Addition

3addends-thousandth: S4

Indicate hops on each number line and complete the addition sentences.

1)  $12.015 + 3 + 2 = \underline{17.015}$



2)  $7.227 + 0.045 + 0.018 = \underline{7.29}$



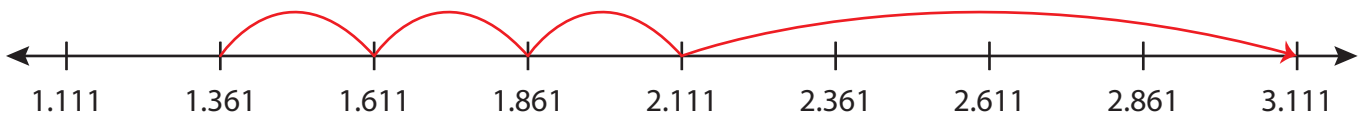
3)  $11.012 + 0.2 +$



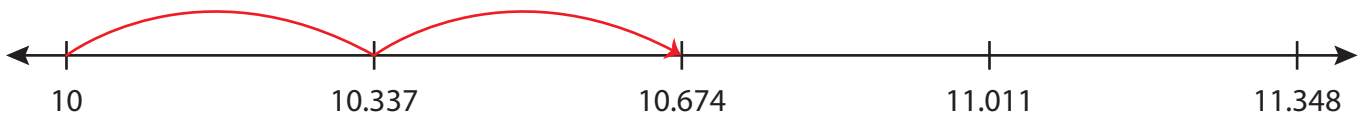
4)  $4.414 + 1 +$



5)  $1.361 + 0.75$



6)  $10 + 0.337 + 0.337 = \underline{10.674}$



**PREVIEW**

Gain complete access to the largest collection of worksheets in all subjects!

Members, please log in to download this worksheet.

Not a member? Please sign up to gain complete access.

[www.mathworksheets4kids.com](http://www.mathworksheets4kids.com)