

Name : _____

Number Line Addition

3 addends-thousandth: S5

Indicate hops on each number line and complete the addition sentences.

1) $3.358 + 0.189 + 0.063 =$ _____



2) $10.651 + 1.25 + 1 =$ _____



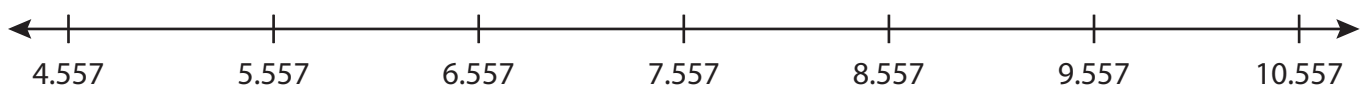
3) $2 + 0.225 + 0.45 =$ _____




4) $16.52 + 0.416 + 0.162 =$ _____



5) $5.557 + 2 + 0.557 =$ _____



6) $1.101 + 1 + 1.5 =$ _____



PREVIEW

Gain complete access to the largest collection of worksheets in all subjects!

Members, please log in to download this worksheet.

Not a member? Please sign up to gain complete access.

www.mathworksheets4kids.com

Name : _____

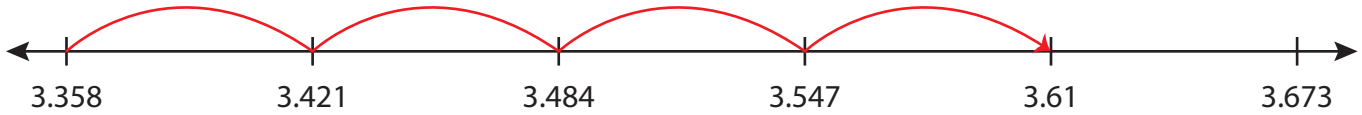
Answer key

Number Line Addition

3 addends - thousandth: S5

Indicate hops on each number line and complete the addition sentences.

1) $3.358 + 0.189 + 0.063 = \underline{3.61}$



2) $10.651 + 1.25 + 1 = \underline{12.901}$



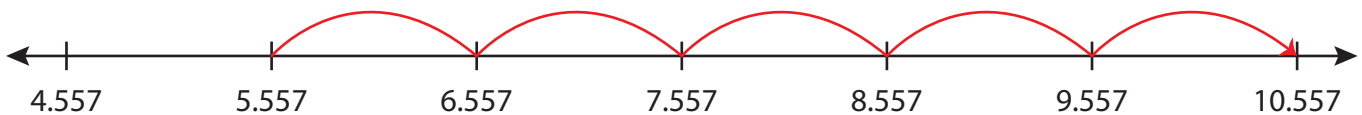
3) $2 + 0.225 + 0.675 = \underline{2.9}$



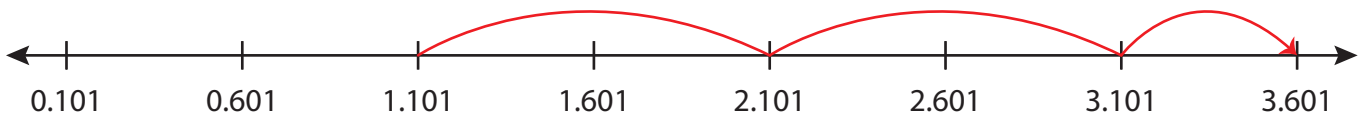
4) $16.52 + 0.416 + 0.108 = \underline{17.044}$



5) $5.557 + 2 + 0.943 = \underline{8.5$



6) $1.101 + 1 + 1.5 = \underline{3.601}$



PREVIEW

Gain complete access to the largest collection of worksheets in all subjects!

Members, please log in to download this worksheet.

Not a member? Please sign up to gain complete access.

www.mathworksheets4kids.com