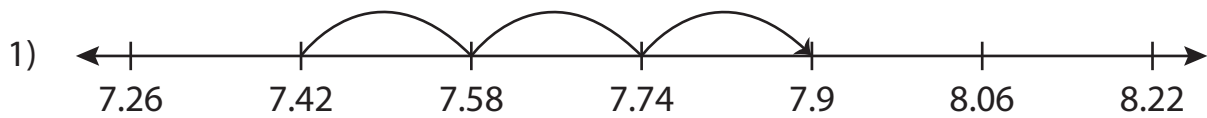


Name : _____

Number Line Addition

Hundredth: S1

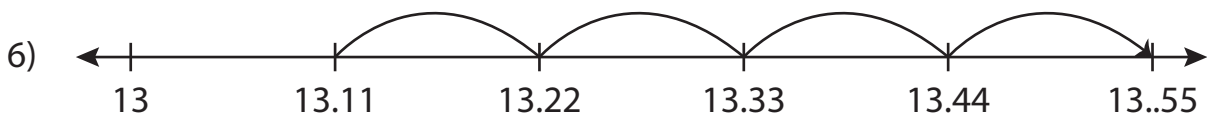
Read each number line and solve the problem.



$$7.42 + 0.48 = \underline{\hspace{2cm}}$$



$$5.05 + 3 = \underline{\hspace{2cm}}$$



$$13.11 + 0.44 = \underline{\hspace{2cm}}$$

PREVIEW

Gain complete access to the largest collection of worksheets in all subjects!

Members, please log in to download this worksheet.

Not a member? Please sign up to gain complete access.

www.mathworksheets4kids.com

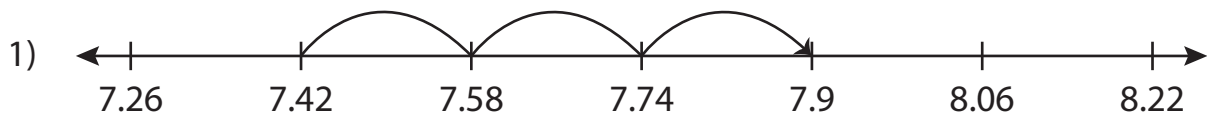
Name : _____

Answer key

Number Line Addition

Hundredth: S1

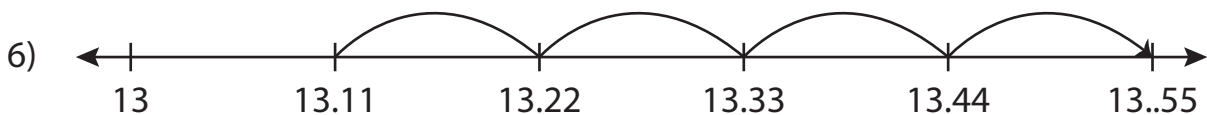
Read each number line and solve the problem.



$$7.42 + 0.48 = \underline{7.9}$$



$$5.05 + 3 = \underline{8.05}$$



$$13.11 + 0.44 = \underline{13.55}$$

PREVIEW

Gain complete access to the largest collection of worksheets in all subjects!

Members, please log in to download this worksheet.

Not a member? Please sign up to gain complete access.

www.mathworksheets4kids.com