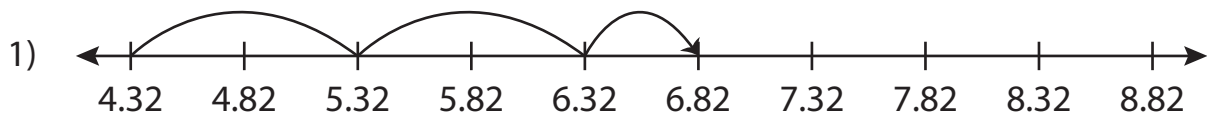


Name : _____

Number Line Addition

Hundredth: S2

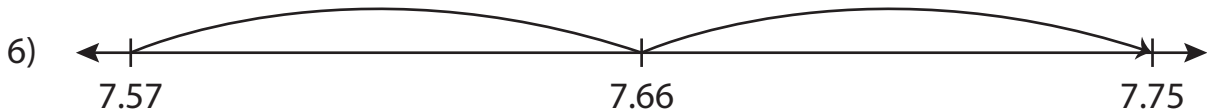
Read each number line and solve the problem.



$$4.32 + 2.5 = \underline{\hspace{2cm}}$$



$$11.46 + 0.9 = \underline{\hspace{2cm}}$$



$$7.57 + 0.18 = \underline{\hspace{2cm}}$$

PREVIEW

Gain complete access to the largest collection of worksheets in all subjects!

Members, please log in to download this worksheet.

Not a member? Please sign up to gain complete access.

www.mathworksheets4kids.com

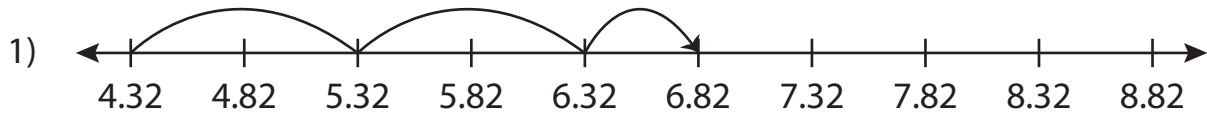
Name : _____

Answer key

Number Line Addition

Hundredth: S2

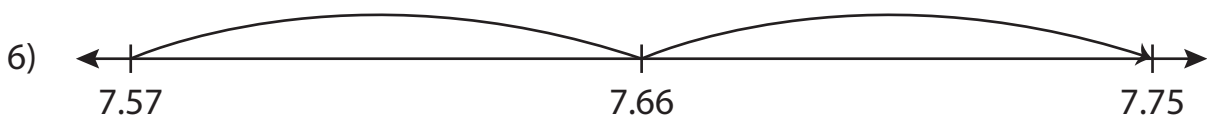
Read each number line and solve the problem.



$$4.32 + 2.5 = \underline{6.82}$$



$$11.46 + 0.9 = \underline{12.36}$$



$$7.57 + 0.18 = \underline{7.75}$$

PREVIEW

Gain complete access to the largest collection of worksheets in all subjects!

Members, please log in to download this worksheet.

Not a member? Please sign up to gain complete access.

www.mathworksheets4kids.com