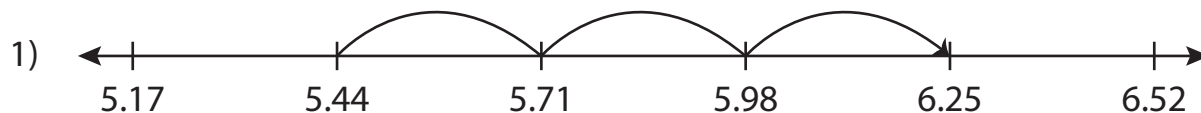


Name : \_\_\_\_\_

# Number Line Addition

Hundredth: S3

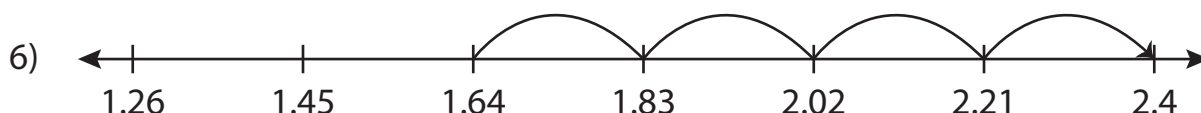
Read each number line and solve the problem.



$$5.44 + 0.81 = \underline{\hspace{2cm}}$$



$$19.02 + 2.5 = \underline{\hspace{2cm}}$$



$$1.64 + 0.76 = \underline{\hspace{2cm}}$$

# PREVIEW

Gain complete access to the largest collection of worksheets in all subjects!

Members, please log in to download this worksheet.

Not a member? Please sign up to gain complete access.

[www.mathworksheets4kids.com](http://www.mathworksheets4kids.com)

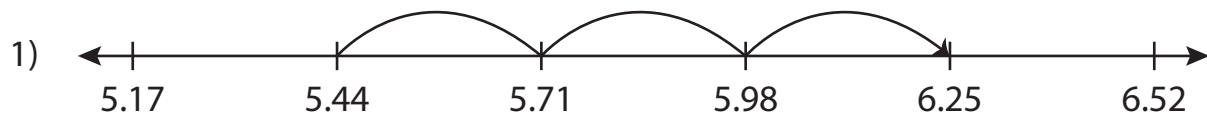
Name : \_\_\_\_\_

## Answer key

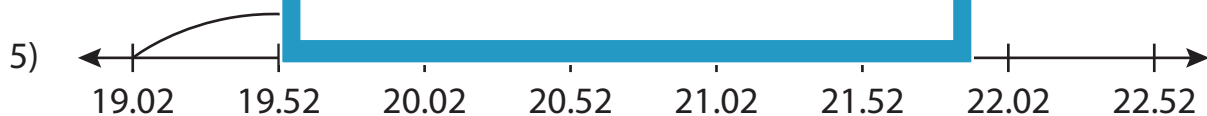
# Number Line Addition

Hundredth: S3

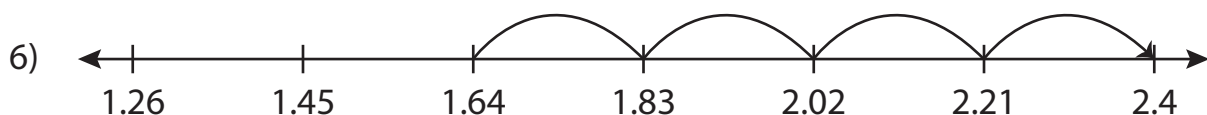
Read each number line and solve the problem.



$$5.44 + 0.81 = \underline{6.25}$$



$$19.02 + 2.5 = \underline{21.52}$$



$$1.64 + 0.76 = \underline{2.4}$$

# PREVIEW

Gain complete access to the largest collection of worksheets in all subjects!

Members, please log in to download this worksheet.

Not a member? Please sign up to gain complete access.

[www.mathworksheets4kids.com](http://www.mathworksheets4kids.com)