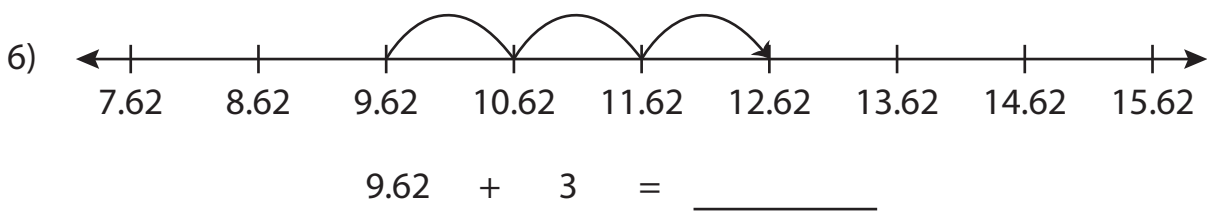
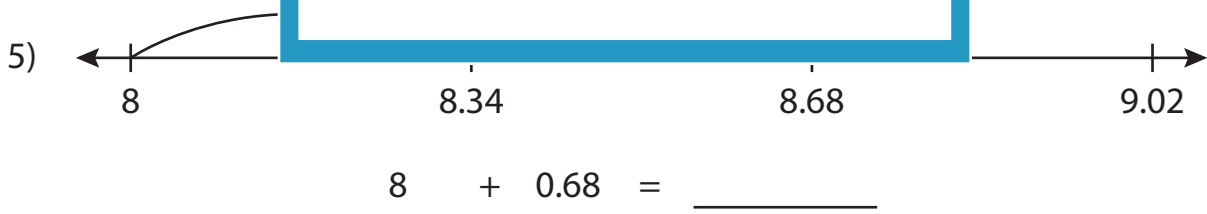
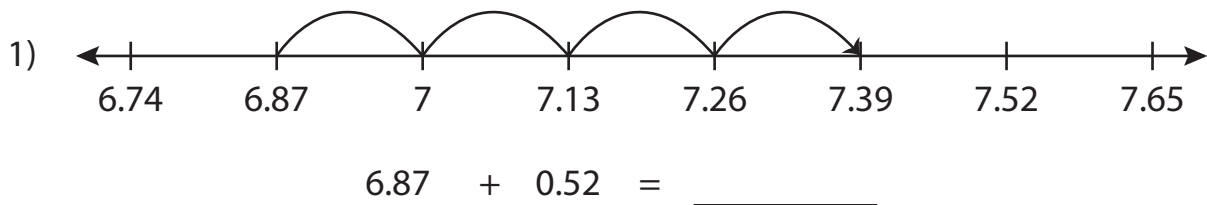


Name : \_\_\_\_\_

# Number Line Addition

Hundredth: S4

Read each number line and solve the problem.



**PREVIEW**

Gain complete access to the largest collection of worksheets in all subjects!

Members, please log in to download this worksheet.

Not a member? Please sign up to gain complete access.

[www.mathworksheets4kids.com](http://www.mathworksheets4kids.com)

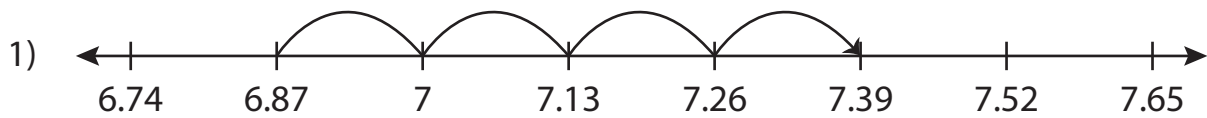
Name : \_\_\_\_\_

## Answer key

# Number Line Addition

Hundredth: S4

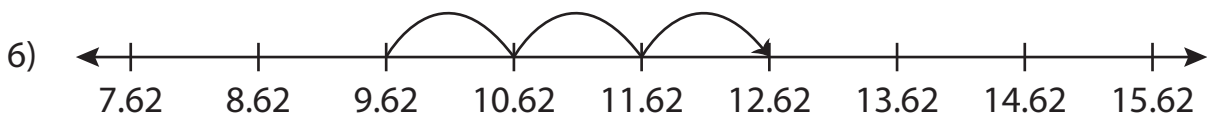
Read each number line and solve the problem.



$$6.87 + 0.52 = \underline{7.39}$$



$$8 + 0.68 = \underline{8.68}$$



$$9.62 + 3 = \underline{12.62}$$

**PREVIEW**

Gain complete access to the largest collection of worksheets in all subjects!

Members, please log in to download this worksheet.

Not a member? Please sign up to gain complete access.

[www.mathworksheets4kids.com](http://www.mathworksheets4kids.com)