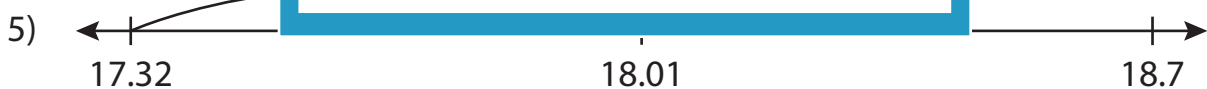
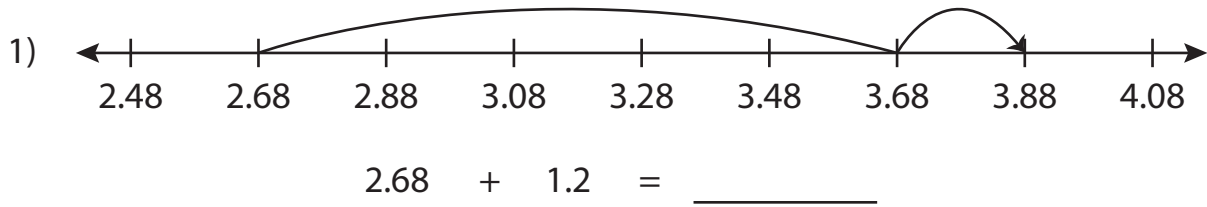


Name : _____

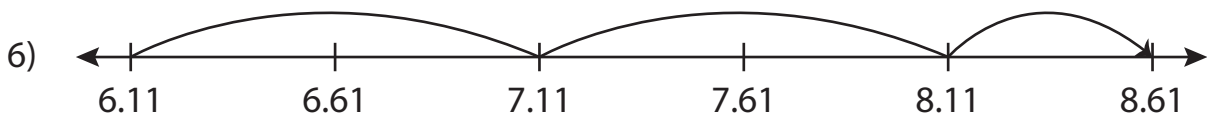
Number Line Addition

Hundredth: S5

Read each number line and solve the problem.



$17.32 + 0.69 = \underline{\hspace{2cm}}$



$6.11 + 2.5 = \underline{\hspace{2cm}}$

PREVIEW

Gain complete access to the largest collection of worksheets in all subjects!

Members, please log in to download this worksheet.

Not a member? Please sign up to gain complete access.

www.mathworksheets4kids.com

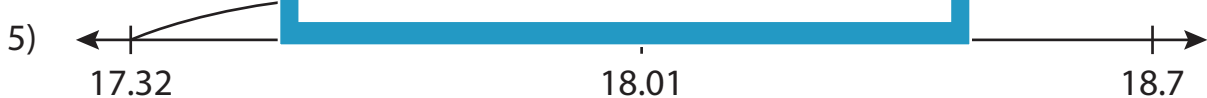
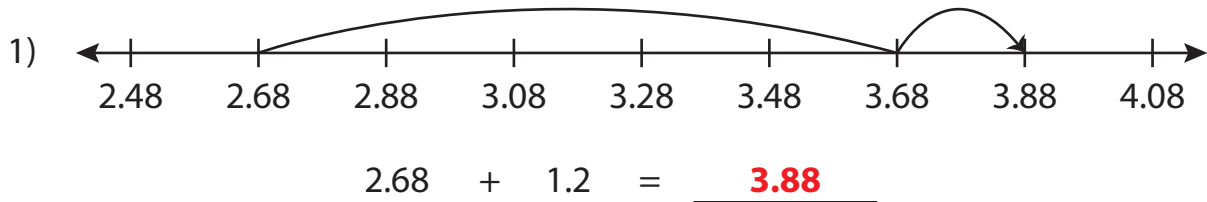
Name : _____

Answer key

Number Line Addition

Hundredth: S5

Read each number line and solve the problem.



$17.32 + 0.69 = \underline{18.01}$



$6.11 + 2.5 = \underline{8.61}$

PREVIEW

Gain complete access to the largest collection of worksheets in all subjects!

Members, please log in to download this worksheet.

Not a member? Please sign up to gain complete access.

www.mathworksheets4kids.com