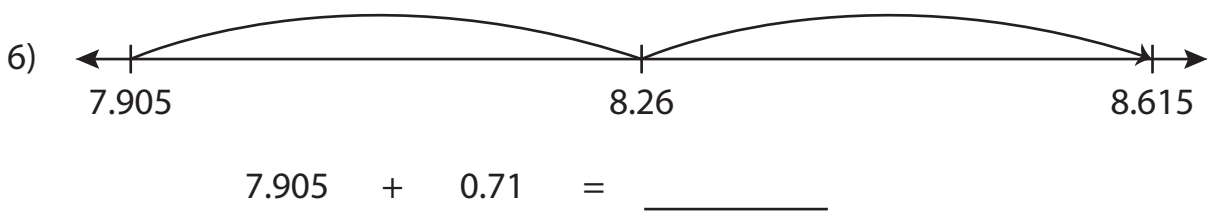
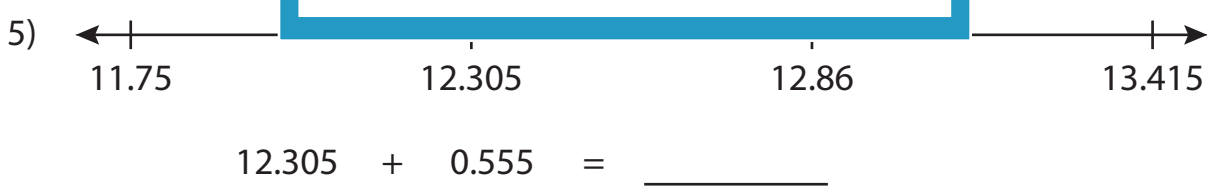
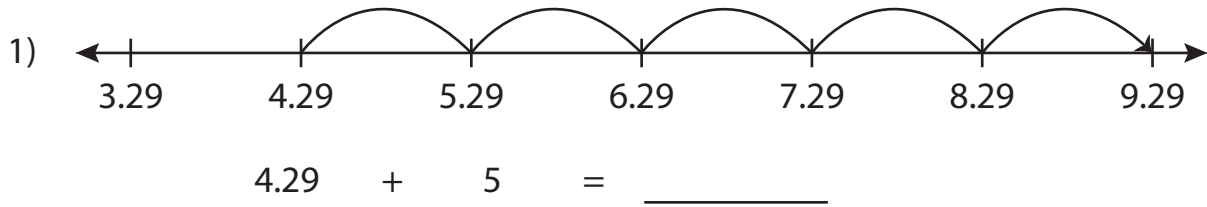


# Number Line Addition

Read each number line and solve the problem.



## PREVIEW

Gain complete access to the largest collection of worksheets in all subjects!

Members, please log in to download this worksheet.

Not a member? Please sign up to gain complete access.

[www.mathworksheets4kids.com](http://www.mathworksheets4kids.com)

**Number Line Addition**

Read each number line and solve the problem.



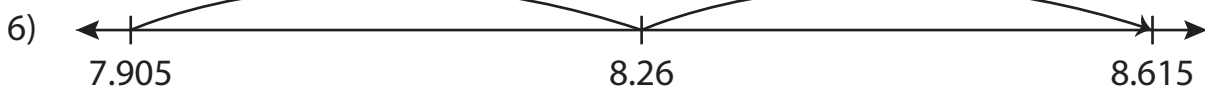
$$4.29 + 5 = \underline{9.29}$$



3)



$$12.305 + 0.555 = \underline{12.86}$$



$$7.905 + 0.71 = \underline{8.615}$$

**PREVIEW**

Gain complete access to the largest collection of worksheets in all subjects!

Members, please log in to download this worksheet.

Not a member? Please sign up to gain complete access.

[www.mathworksheets4kids.com](http://www.mathworksheets4kids.com)