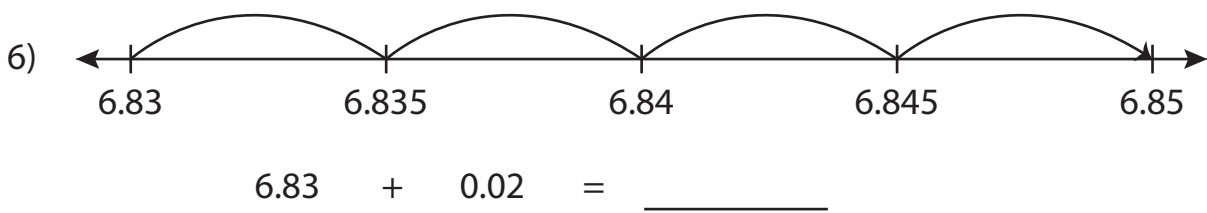
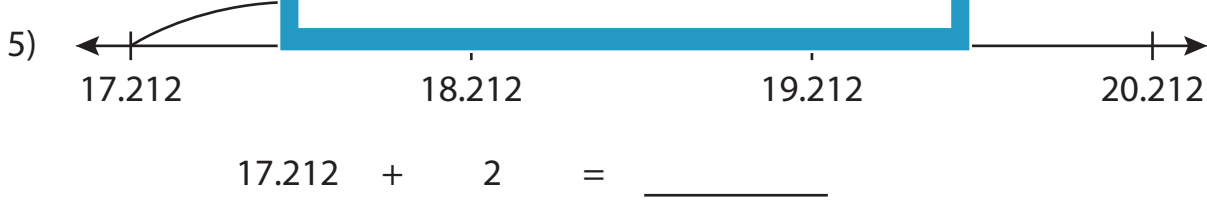
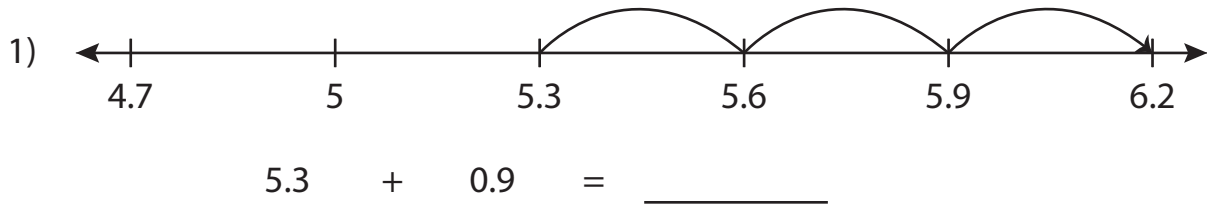


Name : _____

Number Line Addition

Sheet 3

Read each number line and solve the problem.



PREVIEW

Gain complete access to the largest collection of worksheets in all subjects!

Members, please log in to download this worksheet.

Not a member? Please sign up to gain complete access.

www.mathworksheets4kids.com

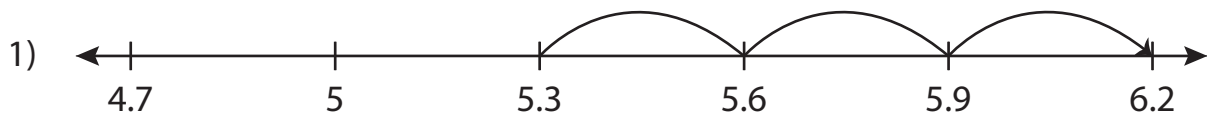
Name : _____

Answer key

Number Line Addition

Sheet 3

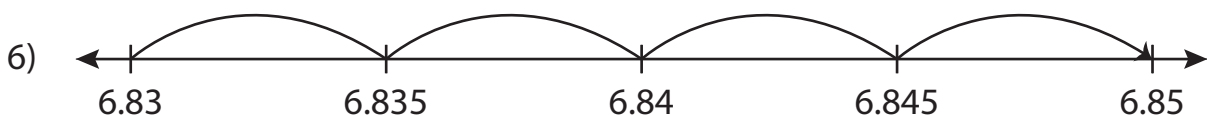
Read each number line and solve the problem.



$$5.3 + 0.9 = \underline{6.2}$$



$$17.212 + 2 = \underline{19.212}$$



$$6.83 + 0.02 = \underline{6.85}$$

PREVIEW

Gain complete access to the largest collection of worksheets in all subjects!

Members, please log in to download this worksheet.

Not a member? Please sign up to gain complete access.

www.mathworksheets4kids.com