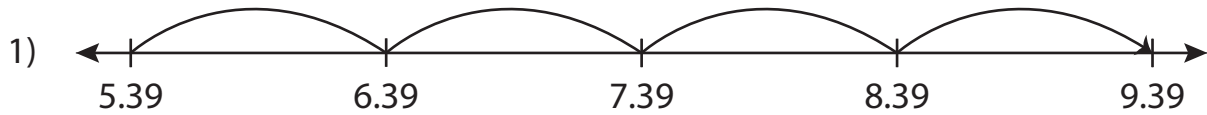


Name : _____

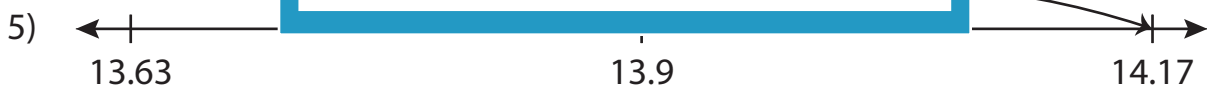
Number Line Addition

Sheet 4

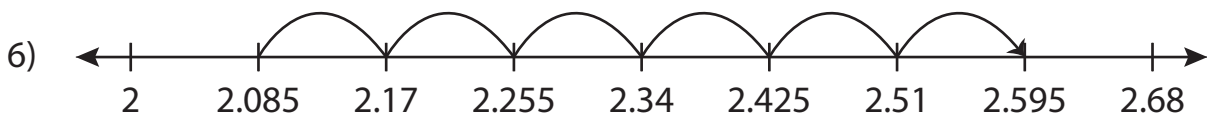
Read each number line and solve the problem.



$$5.39 + 4 = \underline{\hspace{2cm}}$$



$$13.9 + 0.27 = \underline{\hspace{2cm}}$$



$$2.085 + 0.51 = \underline{\hspace{2cm}}$$

PREVIEW

Gain complete access to the largest collection of worksheets in all subjects!

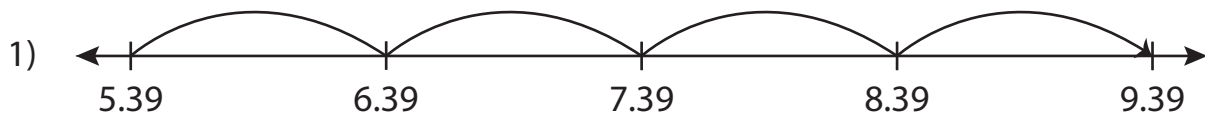
Members, please log in to download this worksheet.

Not a member? Please sign up to gain complete access.

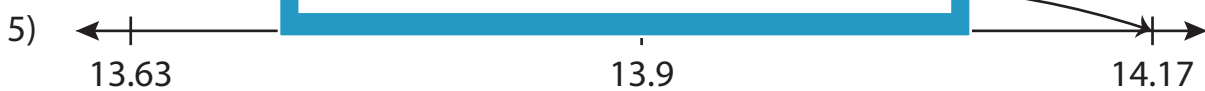
www.mathworksheets4kids.com

Number Line Addition

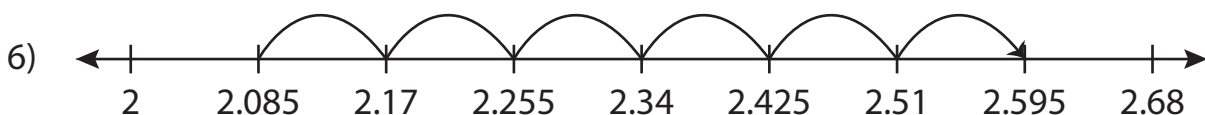
Read each number line and solve the problem.



$$5.39 + 4 = \underline{9.39}$$



$$13.9 + 0.27 = \underline{14.17}$$



$$2.085 + 0.51 = \underline{2.595}$$

PREVIEW

Gain complete access to the largest collection of worksheets in all subjects!

Members, please log in to download this worksheet.

Not a member? Please sign up to gain complete access.

www.mathworksheets4kids.com