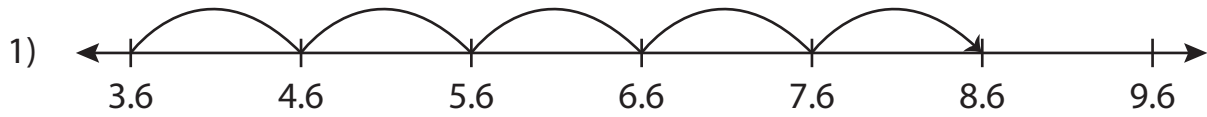


Name : \_\_\_\_\_

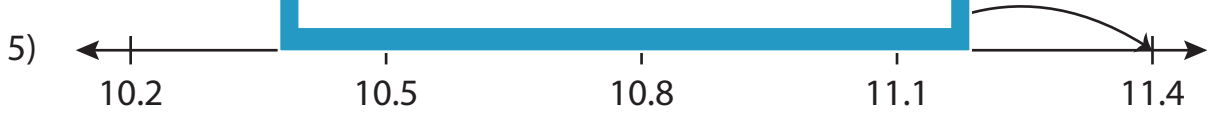
# Number Line Addition

Tenth: S2

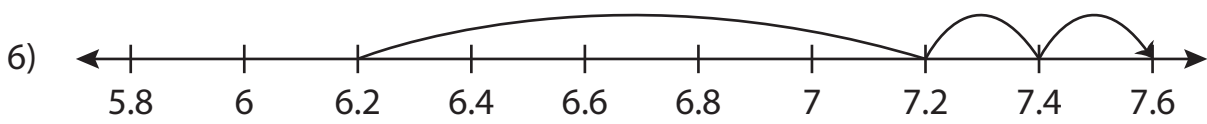
Read each number line and solve the problem.



$$3.6 + 5 = \underline{\hspace{2cm}}$$



$$10.5 + 0.9 = \underline{\hspace{2cm}}$$



$$6.2 + 1.4 = \underline{\hspace{2cm}}$$

**PREVIEW**

Gain complete access to the largest collection of worksheets in all subjects!

Members, please log in to download this worksheet.

Not a member? Please sign up to gain complete access.

[www.mathworksheets4kids.com](http://www.mathworksheets4kids.com)

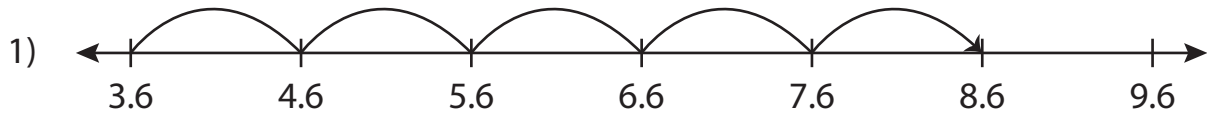
Name : \_\_\_\_\_

## Answer key

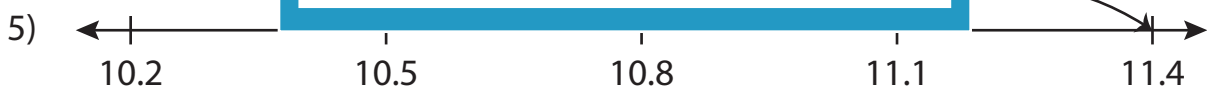
# Number Line Addition

Tenth: S2

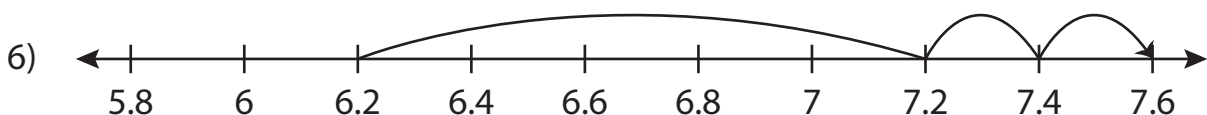
Read each number line and solve the problem.



$$3.6 + 5 = \underline{8.6}$$



$$10.5 + 0.9 = \underline{11.4}$$



$$6.2 + 1.4 = \underline{7.6}$$

# PREVIEW

Gain complete access to the largest collection of worksheets in all subjects!

Members, please log in to download this worksheet.

Not a member? Please sign up to gain complete access.

[www.mathworksheets4kids.com](http://www.mathworksheets4kids.com)