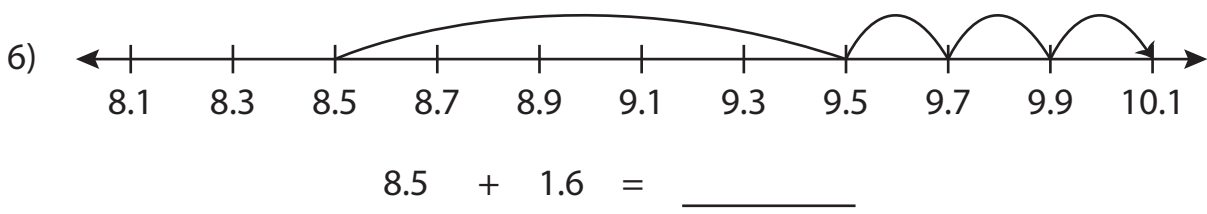
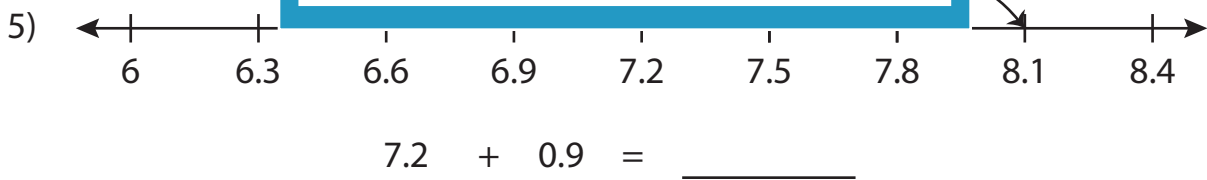
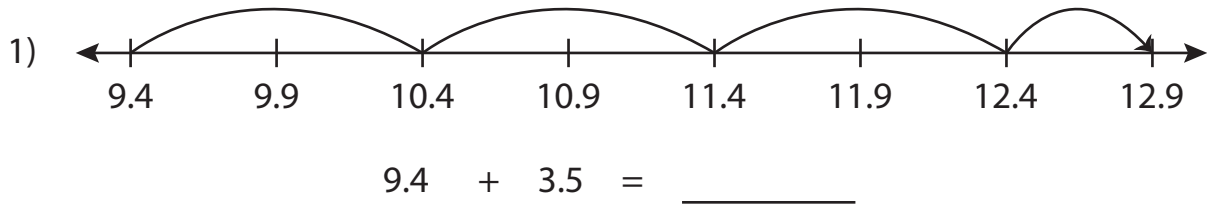


Name : _____

Number Line Addition

Tenth: S3

Read each number line and solve the problem.



PREVIEW

Gain complete access to the largest collection of worksheets in all subjects!

Members, please log in to download this worksheet.

Not a member? Please sign up to gain complete access.

www.mathworksheets4kids.com

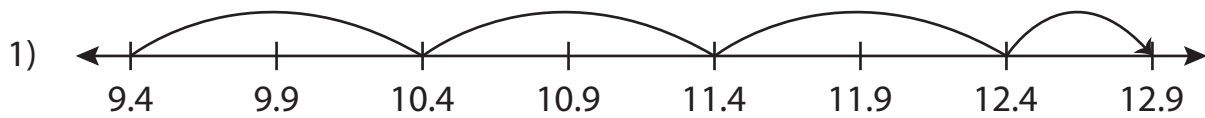
Name : _____

Answer key

Number Line Addition

Tenth: S3

Read each number line and solve the problem.



$$9.4 + 3.5 = \underline{12.9}$$



PREVIEW

Gain complete access to the largest
collection of worksheets in all subjects!

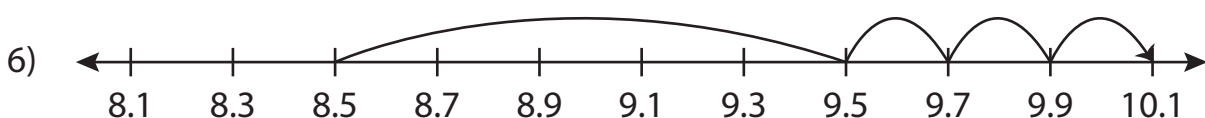
Members, please
log in to
download this
worksheet.

Not a member?
Please sign up to
gain complete
access.

www.mathworksheets4kids.com



$$7.2 + 0.9 = \underline{8.1}$$



$$8.5 + 1.6 = \underline{10.1}$$