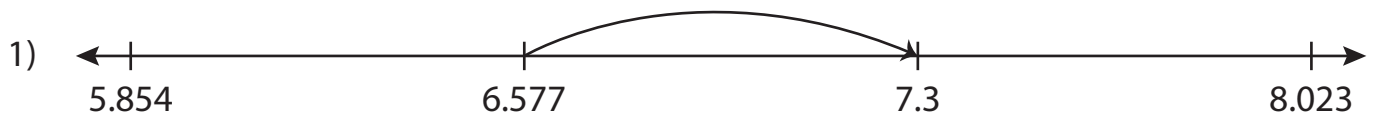


Name : _____

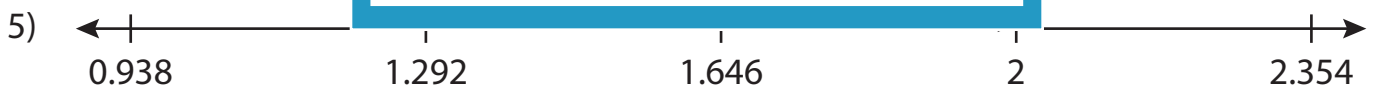
Number Line Addition

Thousandth: S1


Read each number line and solve the problem.



$$6.577 + 0.723 = \underline{\hspace{2cm}}$$



$$1.292 + 0.708 = \underline{\hspace{2cm}}$$



$$7.514 + 2.5 = \underline{\hspace{2cm}}$$

PREVIEW

Gain complete access to the largest collection of worksheets in all subjects!

Members, please log in to download this worksheet.

Not a member? Please sign up to gain complete access.

www.mathworksheets4kids.com

Name : _____

Answer key

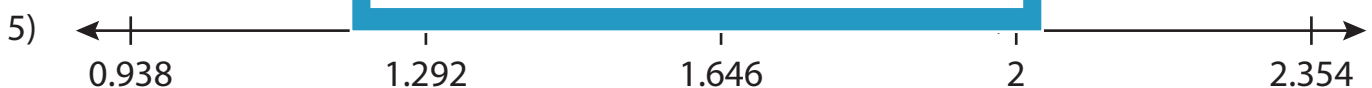
Number Line Addition

Thousandth: S1

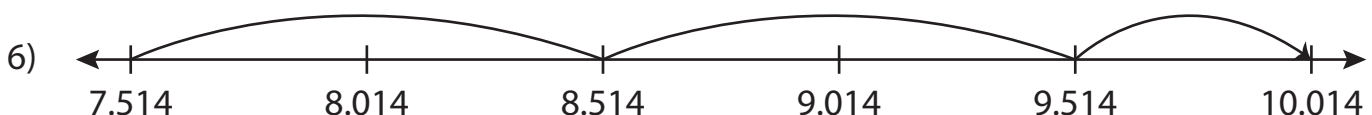
Read each number line and solve the problem.



$$6.577 + 0.723 = \underline{7.3}$$



$$1.292 + 0.708 = \underline{2}$$



$$7.514 + 2.5 = \underline{10.014}$$

PREVIEW

Gain complete access to the largest collection of worksheets in all subjects!

Members, please log in to download this worksheet.

Not a member? Please sign up to gain complete access.

www.mathworksheets4kids.com