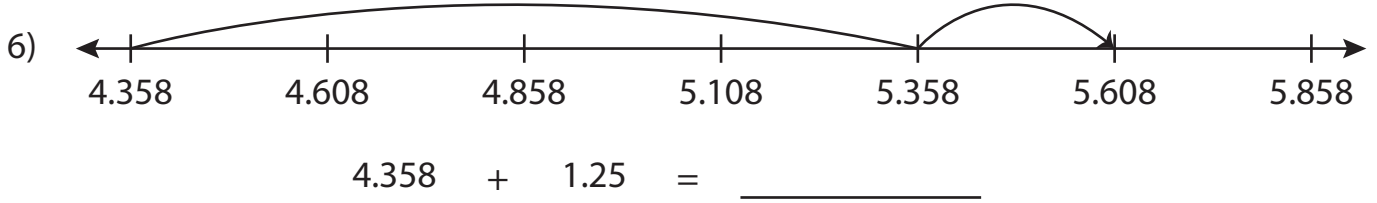
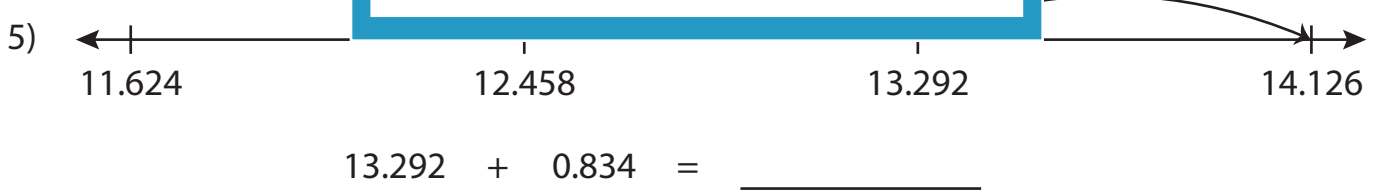
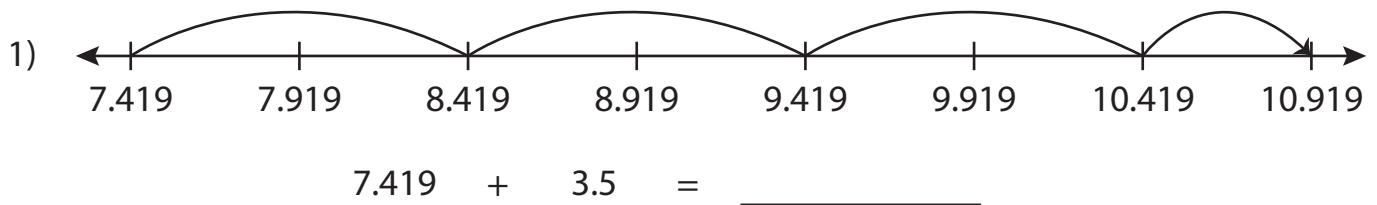


Name : _____

Number Line Addition

Thousandth: S3

Read each number line and solve the problem.



PREVIEW

Gain complete access to the largest collection of worksheets in all subjects!

Members, please log in to download this worksheet.

Not a member? Please sign up to gain complete access.

www.mathworksheets4kids.com

Name : _____

Answer key

Number Line Addition

Thousandth: S3

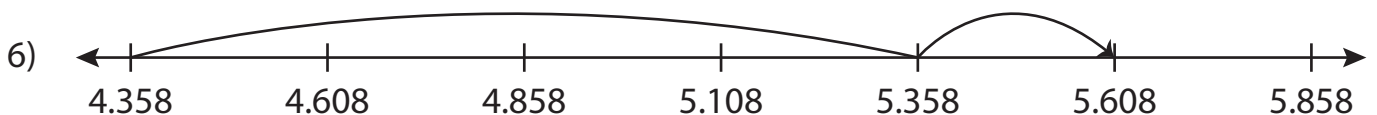
Read each number line and solve the problem.



$$7.419 + 3.5 = \underline{10.919}$$



$$13.292 + 0.834 = \underline{14.126}$$



$$4.358 + 1.25 = \underline{5.608}$$

PREVIEW

Gain complete access to the largest collection of worksheets in all subjects!

Members, please log in to download this worksheet.

Not a member? Please sign up to gain complete access.

www.mathworksheets4kids.com