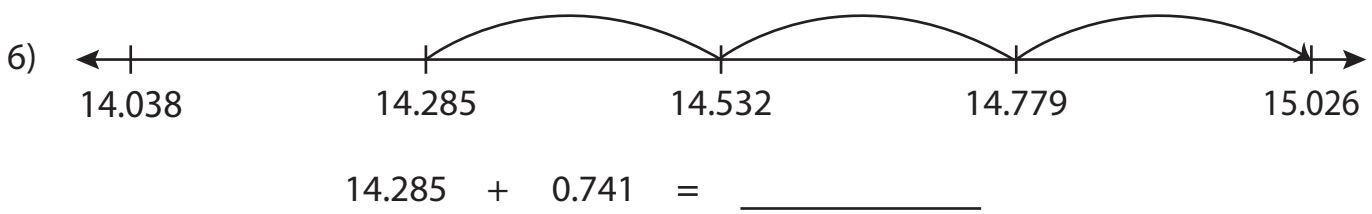
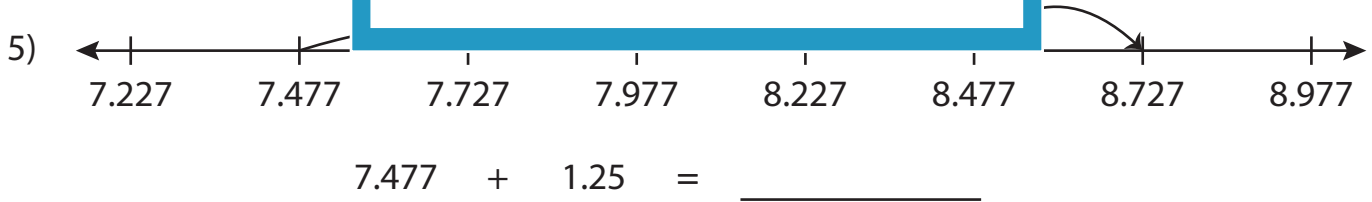
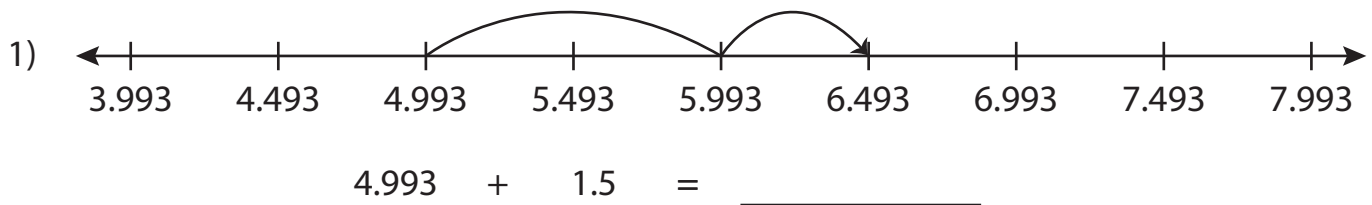


Name : _____

Number Line Addition

Thousandth: S5

Read each number line and solve the problem.



PREVIEW

Gain complete access to the largest collection of worksheets in all subjects!

Members, please log in to download this worksheet.

Not a member? Please sign up to gain complete access.

www.mathworksheets4kids.com

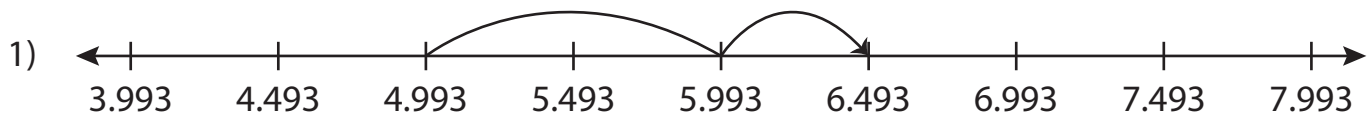
Name : _____

Answer key

Number Line Addition

Thousandth: S5

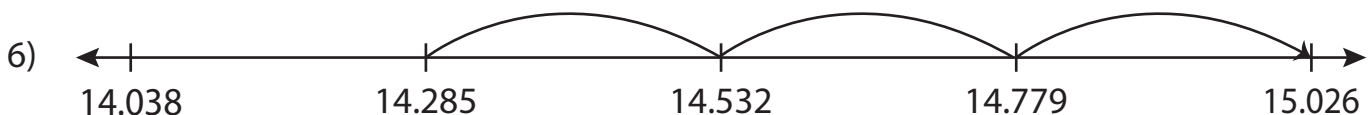
Read each number line and solve the problem.



$$4.993 + 1.5 = \underline{6.493}$$



$$7.477 + 1.25 = \underline{8.727}$$



$$14.285 + 0.741 = \underline{15.026}$$

PREVIEW

Gain complete access to the largest collection of worksheets in all subjects!

Members, please log in to download this worksheet.

Not a member? Please sign up to gain complete access.

www.mathworksheets4kids.com