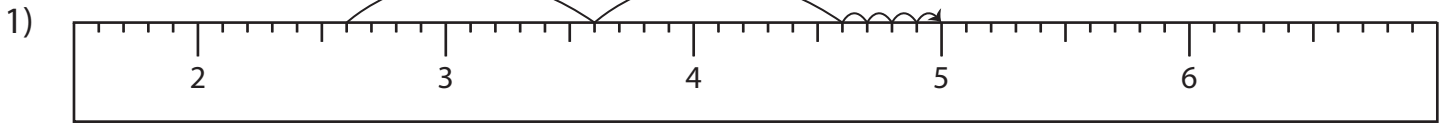


Name : _____

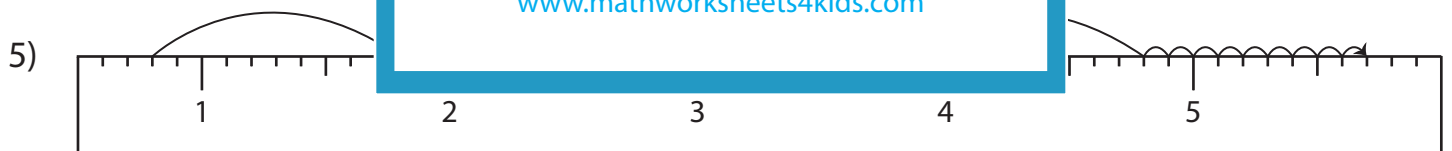
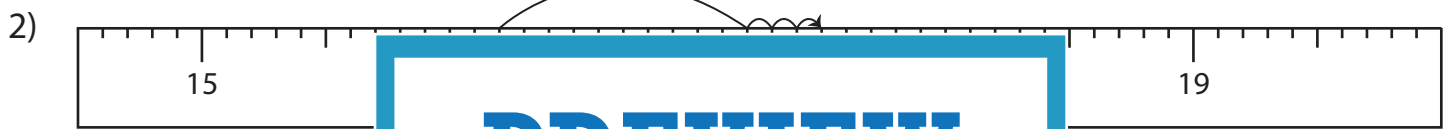
Addition Sentence - Ruler

Sheet 1

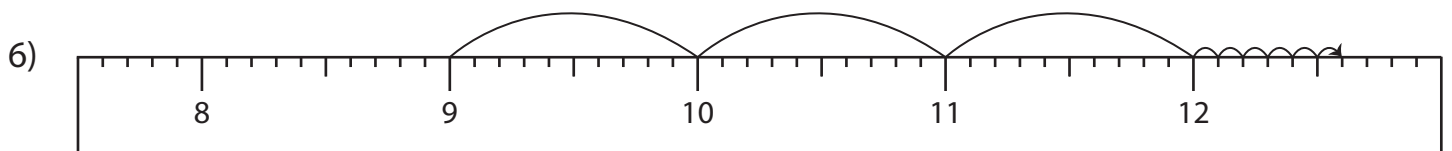
Read each ruler and write the addition sentences.



$$\underline{\quad} + \underline{\quad} = \underline{\quad}$$



$$\underline{\quad} + \underline{\quad} = \underline{\quad}$$



$$\underline{\quad} + \underline{\quad} = \underline{\quad}$$

PREVIEW

Gain complete access to the largest collection of worksheets in all subjects!

Members, please log in to download this worksheet.

Not a member? Please sign up to gain complete access.

www.mathworksheets4kids.com

Name : _____

Answer key

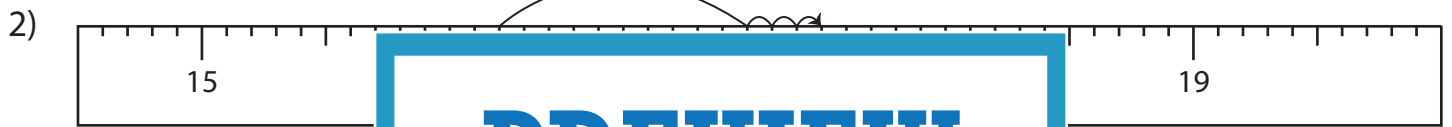
Addition Sentence - Ruler

Sheet 1

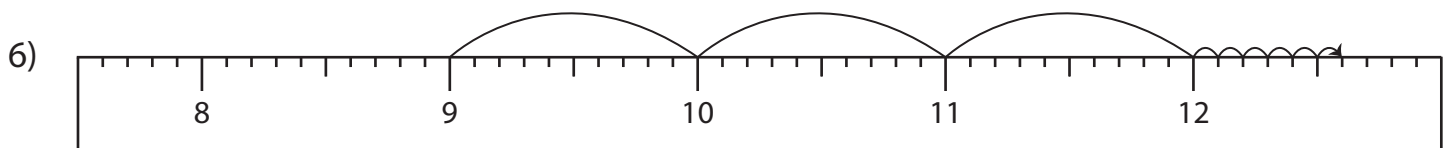
Read each ruler and write the addition sentences.



$$\underline{2.6} + \underline{2.4} = \underline{5}$$



$$\underline{0.8} + \underline{4.9} = \underline{5.7}$$



$$\underline{9} + \underline{3.6} = \underline{12.6}$$

PREVIEW

Gain complete access to the largest collection of worksheets in all subjects!

Members, please log in to download this worksheet.

Not a member? Please sign up to gain complete access.

www.mathworksheets4kids.com