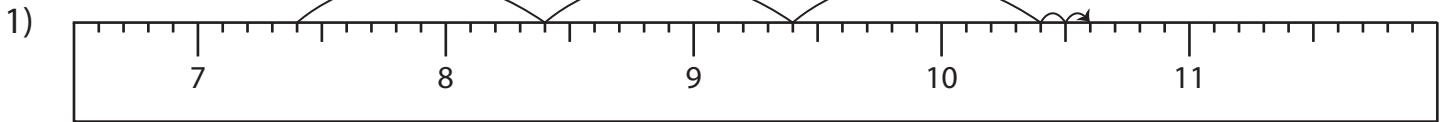


Name : _____

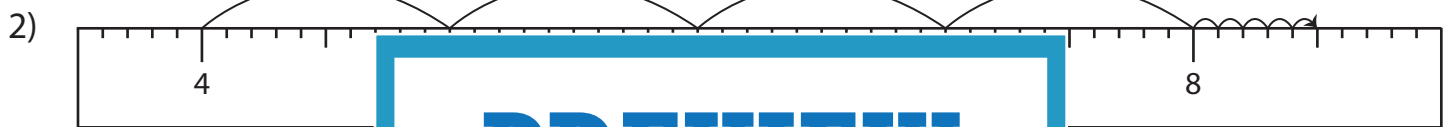
Addition Sentence - Ruler

Sheet 2

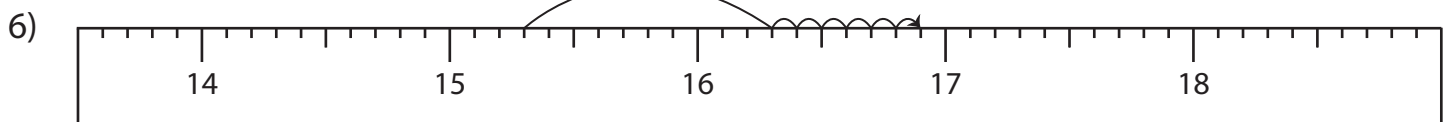
Read each ruler and write the addition sentences.



$$\underline{\quad} + \underline{\quad} = \underline{\quad}$$



$$\underline{\quad} + \underline{\quad} = \underline{\quad}$$



$$\underline{\quad} + \underline{\quad} = \underline{\quad}$$

PREVIEW

Gain complete access to the largest collection of worksheets in all subjects!

Members, please log in to download this worksheet.

Not a member? Please sign up to gain complete access.

www.mathworksheets4kids.com

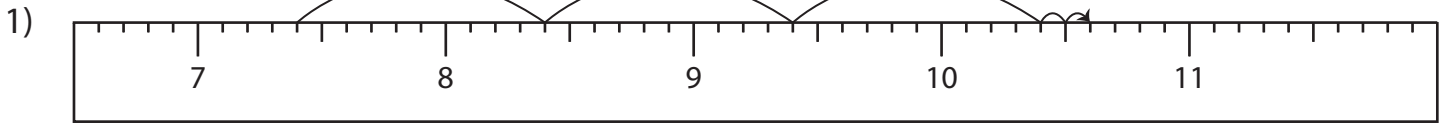
Name : _____

Answer key

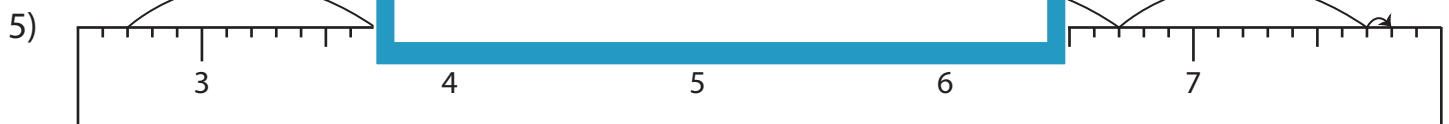
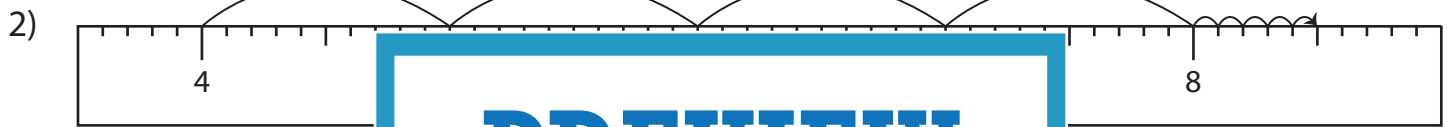
Addition Sentence - Ruler

Sheet 2

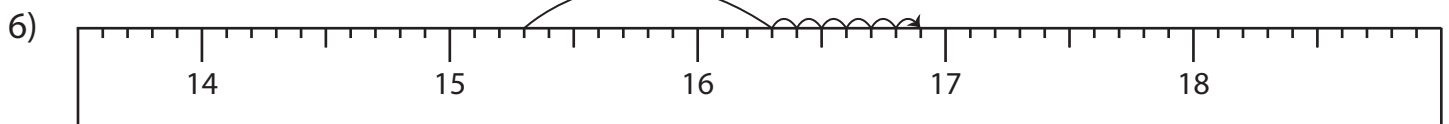
Read each ruler and write the addition sentences.



$$\underline{7.4} + \underline{3.2} = \underline{10.6}$$



$$\underline{2.7} + \underline{5.1} = \underline{7.8}$$



$$\underline{15.3} + \underline{1.6} = \underline{16.9}$$

PREVIEW

Gain complete access to the largest collection of worksheets in all subjects!

Members, please log in to download this worksheet.

Not a member? Please sign up to gain complete access.

www.mathworksheets4kids.com