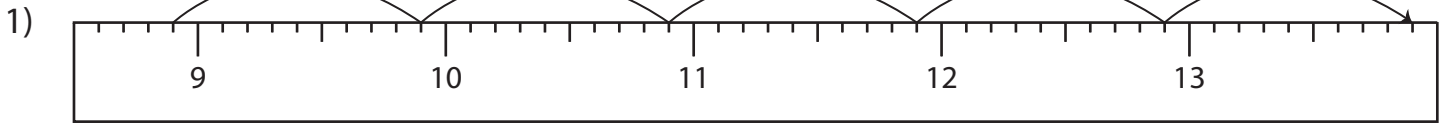


Name : \_\_\_\_\_

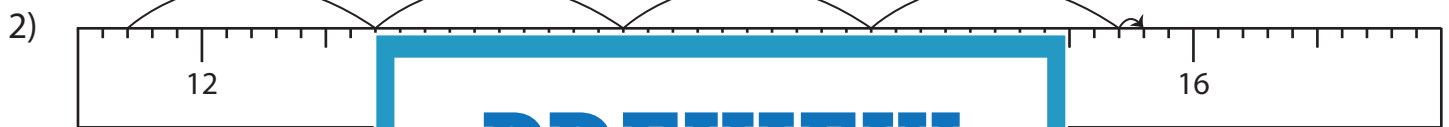
# Addition Sentence - Ruler

Sheet 3

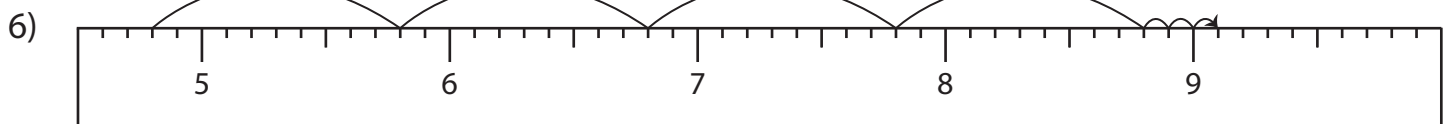
Read each ruler and write the addition sentences.



$$\underline{\quad} + \underline{\quad} = \underline{\quad}$$



$$\underline{\quad} + \underline{\quad} = \underline{\quad}$$



$$\underline{\quad} + \underline{\quad} = \underline{\quad}$$

**PREVIEW**

Gain complete access to the largest collection of worksheets in all subjects!

Members, please log in to download this worksheet.

Not a member? Please sign up to gain complete access.

[www.mathworksheets4kids.com](http://www.mathworksheets4kids.com)

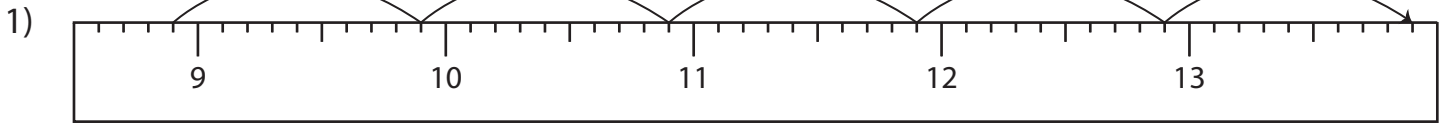
Name : \_\_\_\_\_

## Answer key

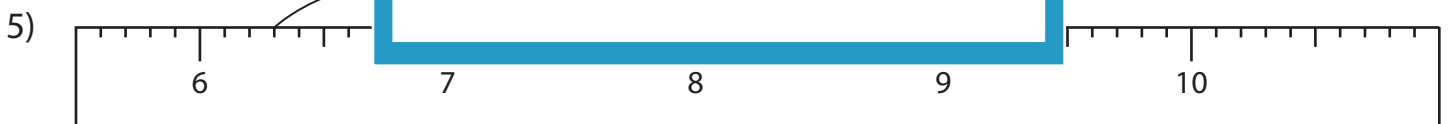
# Addition Sentence - Ruler

Sheet 3

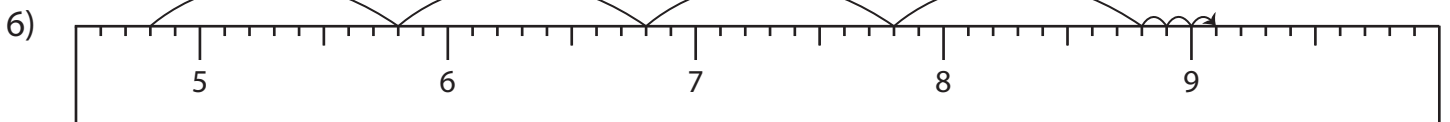
Read each ruler and write the addition sentences.



$$\underline{8.9} + \underline{5} = \underline{13.9}$$



$$\underline{6.3} + \underline{1.9} = \underline{8.2}$$



$$\underline{4.8} + \underline{4.3} = \underline{9.1}$$

# PREVIEW

Gain complete access to the largest collection of worksheets in all subjects!

Members, please log in to download this worksheet.

Not a member? Please sign up to gain complete access.

[www.mathworksheets4kids.com](http://www.mathworksheets4kids.com)