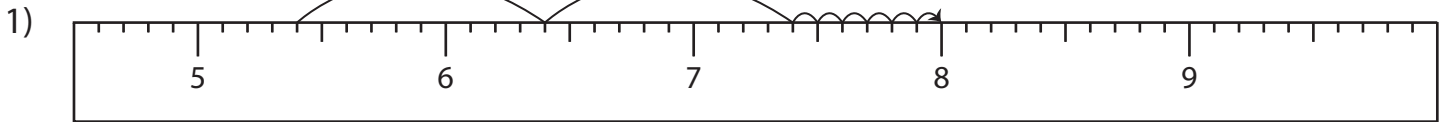


Name : _____

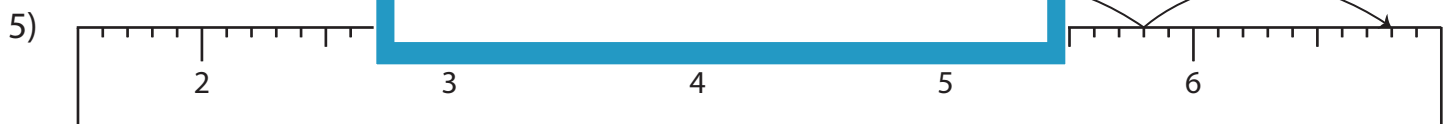
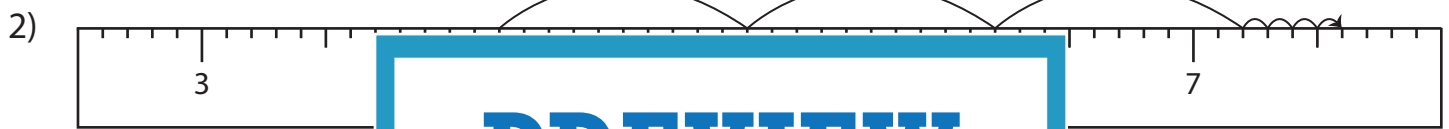
Addition Sentence - Ruler

Sheet 4

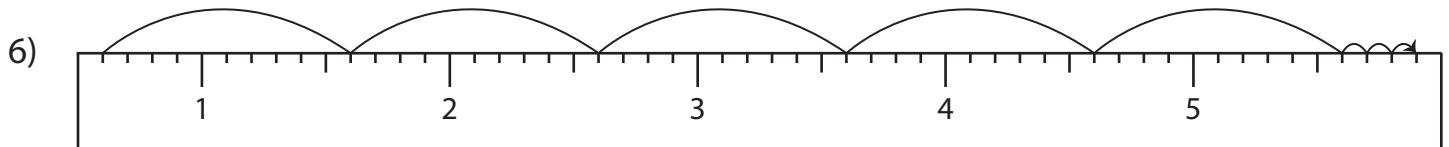
Read each ruler and write the addition sentences.



_____ + _____ = _____



_____ + _____ = _____



_____ + _____ = _____

PREVIEW

Gain complete access to the largest collection of worksheets in all subjects!

Members, please log in to download this worksheet.

Not a member? Please sign up to gain complete access.

www.mathworksheets4kids.com

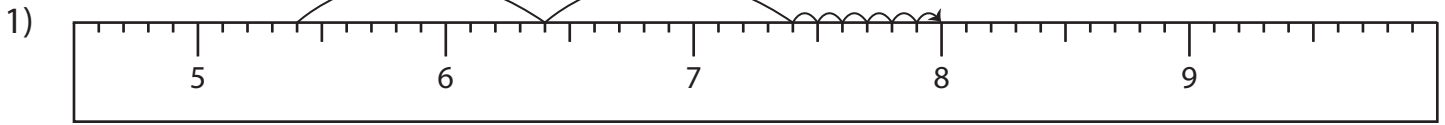
Name : _____

Answer key

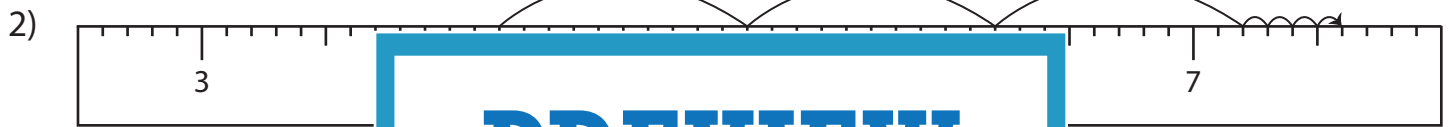
Addition Sentence - Ruler

Sheet 4

Read each ruler and write the addition sentences.



$$\underline{5.4} + \underline{2.6} = \underline{8}$$



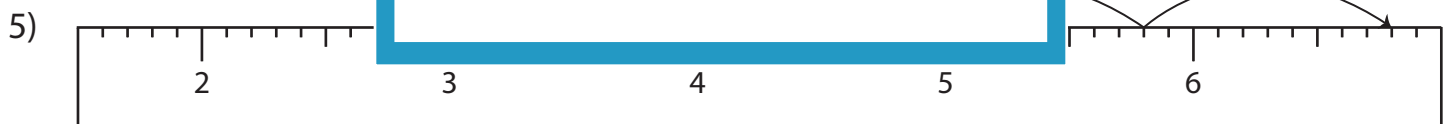
PREVIEW

Gain complete access to the largest collection of worksheets in all subjects!

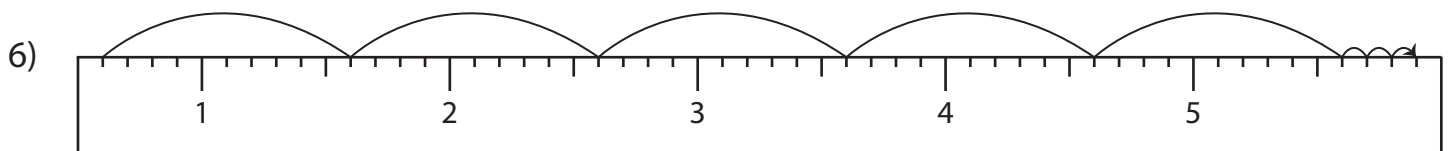
Members, please log in to download this worksheet.

Not a member? Please sign up to gain complete access.

www.mathworksheets4kids.com



$$\underline{3.8} + \underline{3} = \underline{6.8}$$



$$\underline{0.6} + \underline{5.3} = \underline{5.9}$$