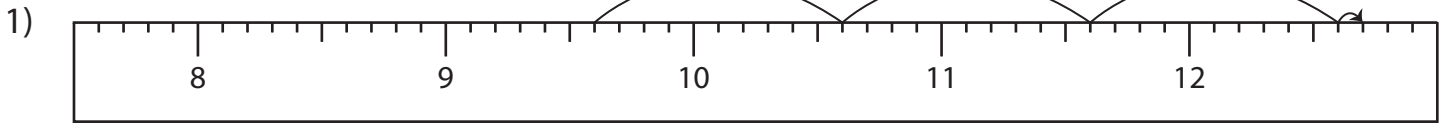


Name : _____

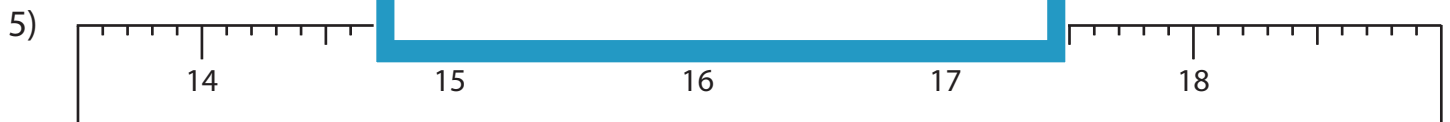
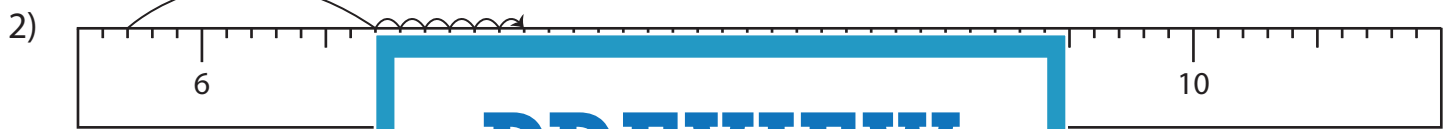
Addition Sentence - Ruler

Sheet 5

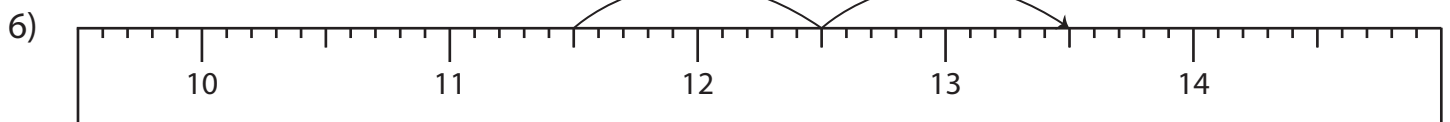
Read each ruler and write the addition sentences.



$$\underline{\quad\quad} + \underline{\quad\quad} = \underline{\quad\quad}$$



$$\underline{\quad\quad} + \underline{\quad\quad} = \underline{\quad\quad}$$



$$\underline{\quad\quad} + \underline{\quad\quad} = \underline{\quad\quad}$$

PREVIEW

Gain complete access to the largest collection of worksheets in all subjects!

Members, please log in to download this worksheet.

Not a member? Please sign up to gain complete access.

www.mathworksheets4kids.com

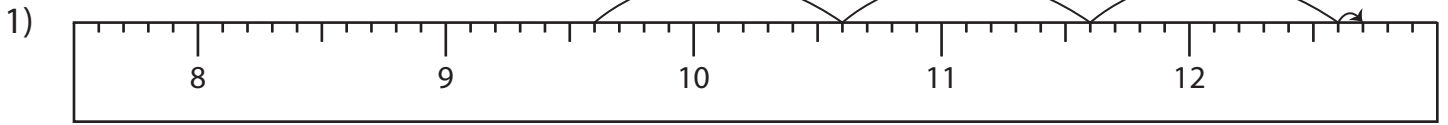
Name : _____

Answer key

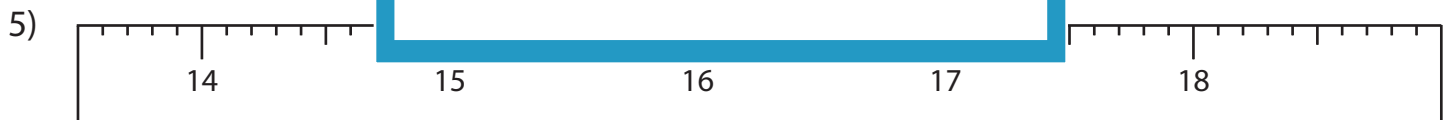
Addition Sentence - Ruler

Sheet 5

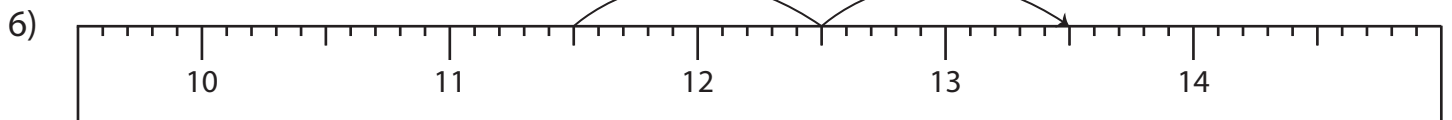
Read each ruler and write the addition sentences.



$$\underline{9.6} + \underline{3.1} = \underline{12.7}$$



$$\underline{15.3} + \underline{1.7} = \underline{17}$$



$$\underline{11.5} + \underline{2} = \underline{13.5}$$

PREVIEW

Gain complete access to the largest collection of worksheets in all subjects!

Members, please log in to download this worksheet.

Not a member? Please sign up to gain complete access.

www.mathworksheets4kids.com