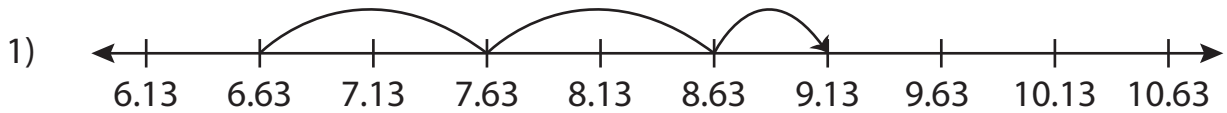


Name : _____

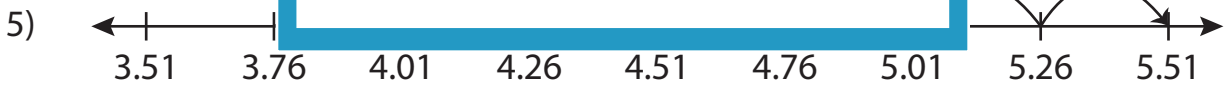
Addition Sentence

Hundredth: S1

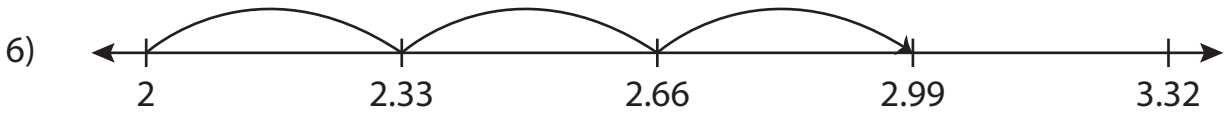
Write the addition sentence that describes each model.



_____ + _____ = _____



_____ + _____ = _____



_____ + _____ = _____

PREVIEW

Gain complete access to the largest collection of worksheets in all subjects!

Members, please log in to download this worksheet.

Not a member? Please sign up to gain complete access.

www.mathworksheets4kids.com

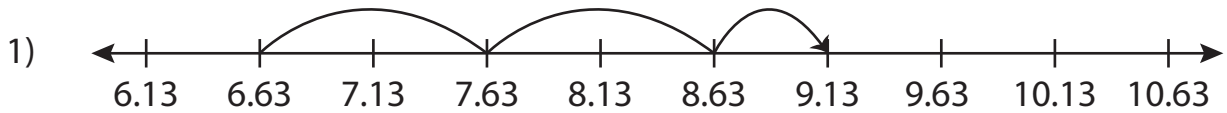
Name : _____

Answer key

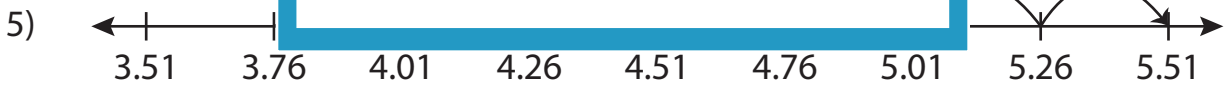
Addition Sentence

Hundredth: S1

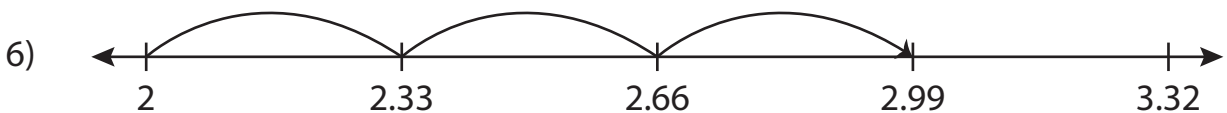
Write the addition sentence that describes each model.



$$\underline{6.63} + \underline{2.5} = \underline{9.13}$$



$$\underline{3.76} + \underline{1.75} = \underline{5.51}$$



$$\underline{2} + \underline{0.99} = \underline{2.99}$$

PREVIEW

Gain complete access to the largest collection of worksheets in all subjects!

Members, please log in to download this worksheet.

Not a member? Please sign up to gain complete access.

www.mathworksheets4kids.com