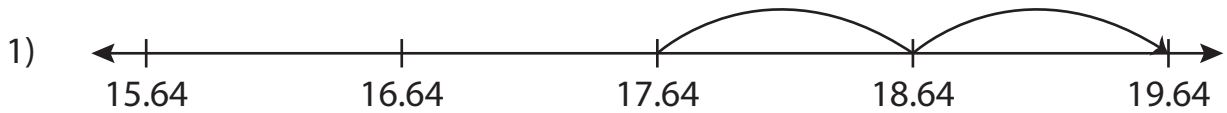


Name : _____

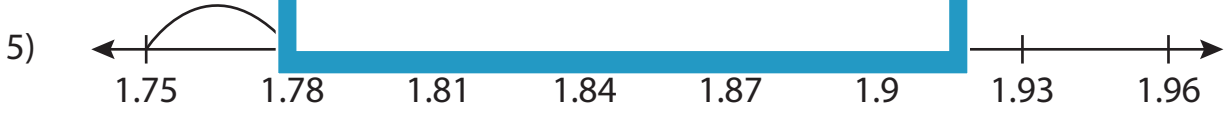
Addition Sentence

Hundredth: S3

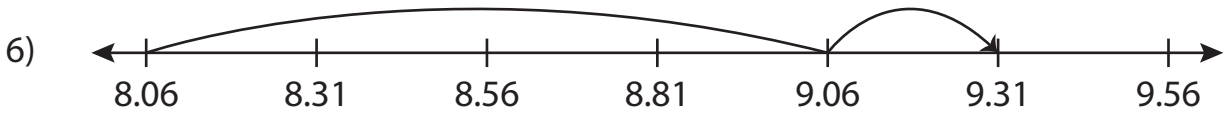
Write the addition sentence that describes each model.



_____ + _____ = _____



_____ + _____ = _____



_____ + _____ = _____

PREVIEW

Gain complete access to the largest collection of worksheets in all subjects!

Members, please log in to download this worksheet.

Not a member? Please sign up to gain complete access.

www.mathworksheets4kids.com

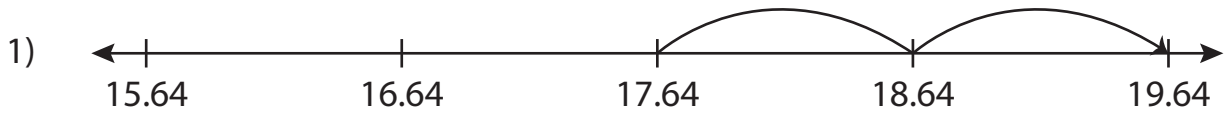
Name : _____

Answer key

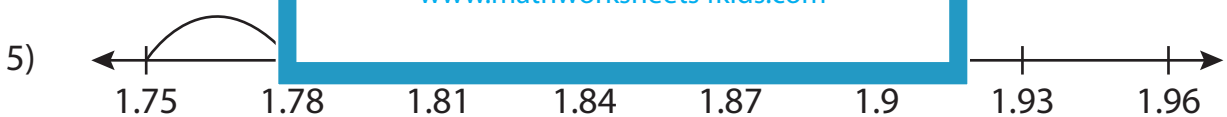
Addition Sentence

Hundredth: S3

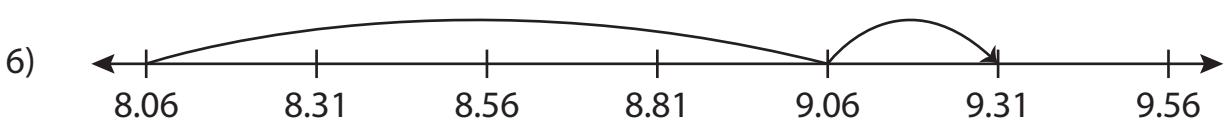
Write the addition sentence that describes each model.



$$\underline{17.64} + \underline{2} = \underline{19.64}$$



$$\underline{1.75} + \underline{0.12} = \underline{1.87}$$



$$\underline{8.06} + \underline{1.25} = \underline{9.31}$$

PREVIEW

Gain complete access to the largest collection of worksheets in all subjects!

Members, please log in to download this worksheet.

Not a member? Please sign up to gain complete access.

www.mathworksheets4kids.com