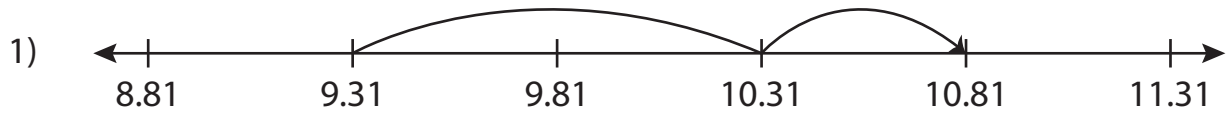


Name : _____

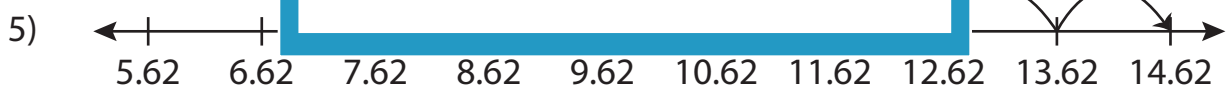
Addition Sentence

Hundredth: 55

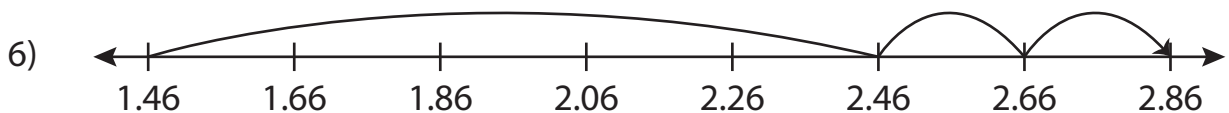
Write the addition sentence that describes each model.



_____ + _____ = _____



_____ + _____ = _____



_____ + _____ = _____

PREVIEW

Gain complete access to the largest collection of worksheets in all subjects!

Members, please log in to download this worksheet.

Not a member? Please sign up to gain complete access.

www.mathworksheets4kids.com

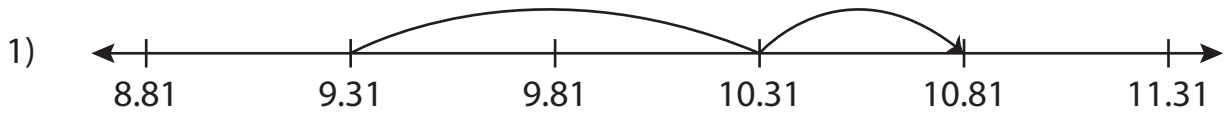
Name : _____

Answer key

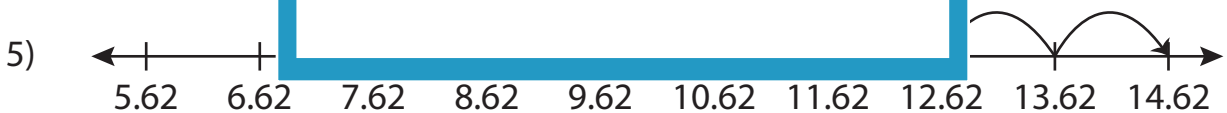
Addition Sentence

Hundredth: 55

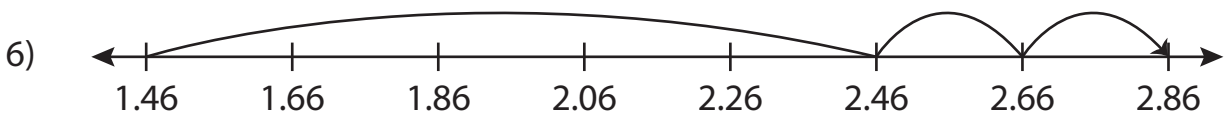
Write the addition sentence that describes each model.



$$\underline{9.31} + \underline{1.5} = \underline{10.81}$$



$$\underline{8.62} + \underline{6} = \underline{14.62}$$



$$\underline{1.46} + \underline{1.4} = \underline{2.86}$$

PREVIEW

Gain complete access to the largest collection of worksheets in all subjects!

Members, please log in to download this worksheet.

Not a member? Please sign up to gain complete access.

www.mathworksheets4kids.com