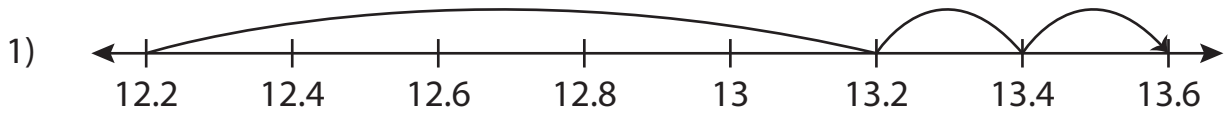


Name : _____

Addition Sentence

Sheet 1

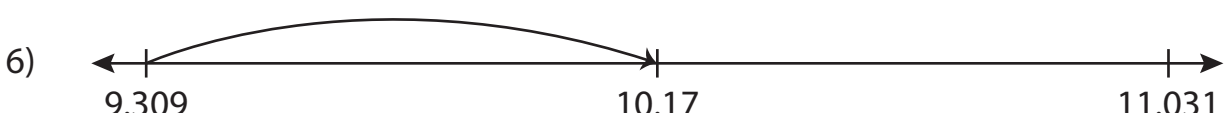
Write the addition sentence that describes each model.



_____ + _____ = _____



_____ + _____ = _____



_____ + _____ = _____

PREVIEW

Gain complete access to the largest collection of worksheets in all subjects!

Members, please log in to download this worksheet.

Not a member? Please sign up to gain complete access.

www.mathworksheets4kids.com

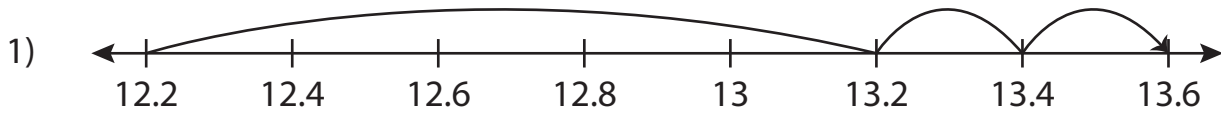
Name : _____

Answer key

Addition Sentence

Sheet 1

Write the addition sentence that describes each model.



$$\underline{12.2} + \underline{1.4} = \underline{13.6}$$



3) A number line starting at 8.25 and ending at 10.25. Major tick marks are at 8.25, 8.75, 9.25, 9.75, 10, and 10.25. Three arrows start at 8.25 and end at 8.75, 9.25, and 9.75 respectively.

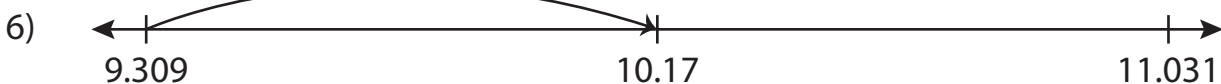
PREVIEW

Gain complete access to the largest collection of worksheets in all subjects!

Members, please log in to download this worksheet.

Not a member? Please sign up to gain complete access.

www.mathworksheets4kids.com



$$\underline{2.32} + \underline{5} = \underline{7.32}$$

$$\underline{9.309} + \underline{0.861} = \underline{10.17}$$