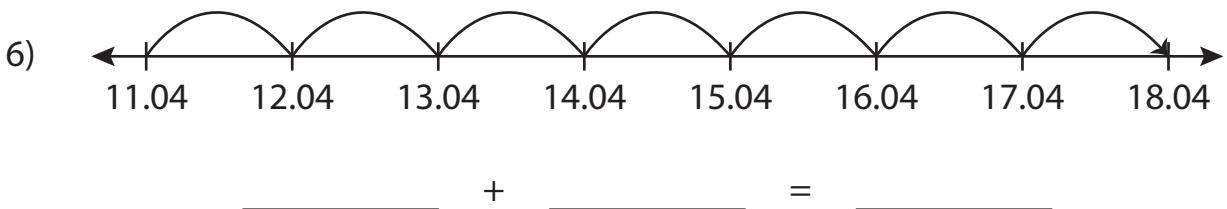

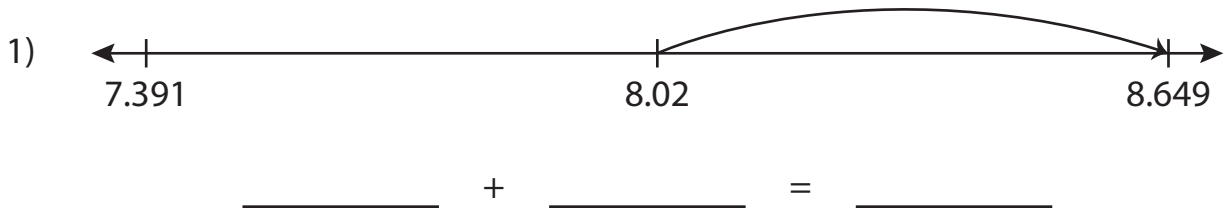


Addition Sentence

Write the addition sentence that describes each model.



PREVIEW

Gain complete access to the largest collection of worksheets in all subjects!

Members, please log in to download this worksheet.

Not a member? Please sign up to gain complete access.

www.mathworksheets4kids.com

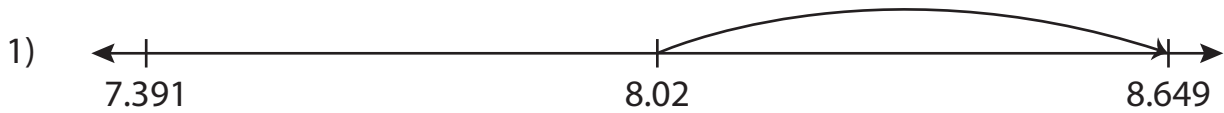
Name : _____

Answer key

Addition Sentence

Sheet 3

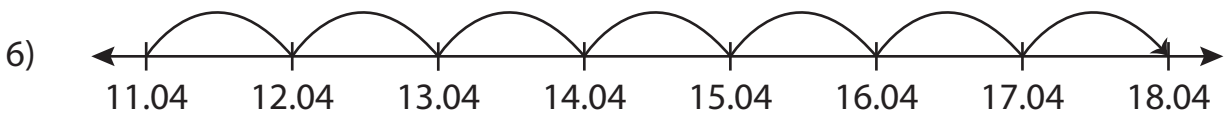
Write the addition sentence that describes each model.



$$\underline{8.02} + \underline{0.629} = \underline{8.649}$$



$$\underline{8.115} + \underline{0.69} = \underline{8.805}$$



$$\underline{11.04} + \underline{7} = \underline{18.04}$$

PREVIEW

Gain complete access to the largest collection of worksheets in all subjects!

Members, please log in to download this worksheet.

Not a member? Please sign up to gain complete access.

www.mathworksheets4kids.com