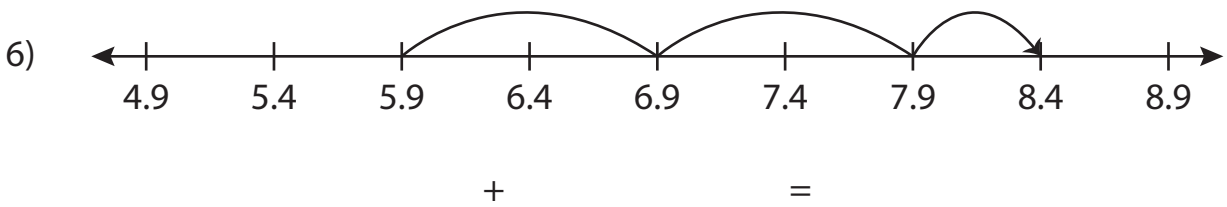

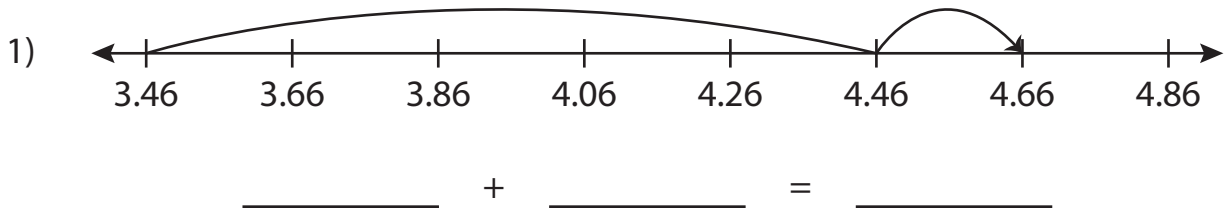


Name : _____

Addition Sentence

Sheet 4

Write the addition sentence that describes each model.



PREVIEW

Gain complete access to the largest collection of worksheets in all subjects!

Members, please log in to download this worksheet.

Not a member? Please sign up to gain complete access.

www.mathworksheets4kids.com

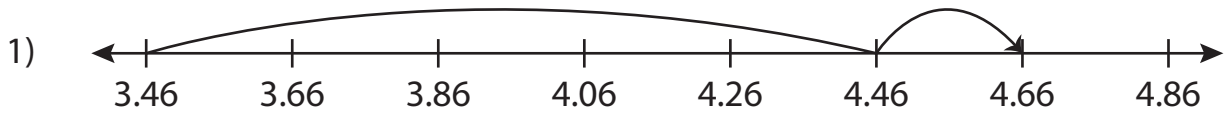
Name : _____

Answer key

Addition Sentence

Sheet 4

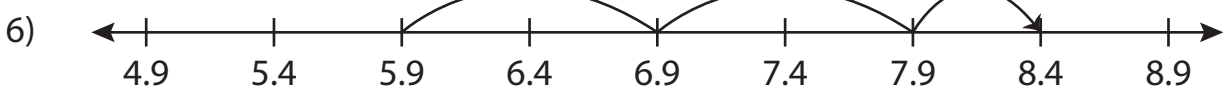
Write the addition sentence that describes each model.



$$\underline{3.46} + \underline{1.2} = \underline{4.66}$$



$$\underline{14.104} + \underline{4} = \underline{18.104}$$



$$\underline{5.9} + \underline{2.5} = \underline{8.4}$$

PREVIEW

Gain complete access to the largest collection of worksheets in all subjects!

Members, please log in to download this worksheet.

Not a member? Please sign up to gain complete access.

www.mathworksheets4kids.com