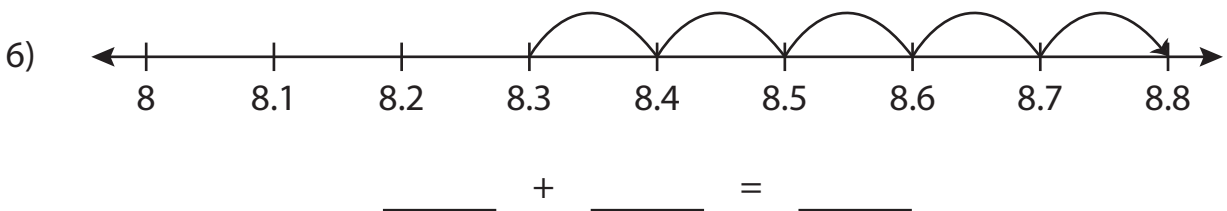
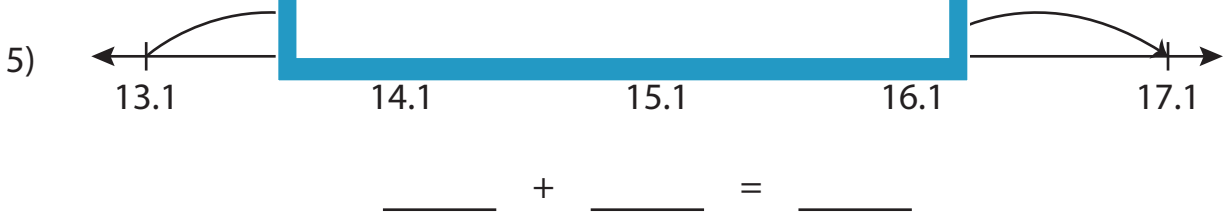
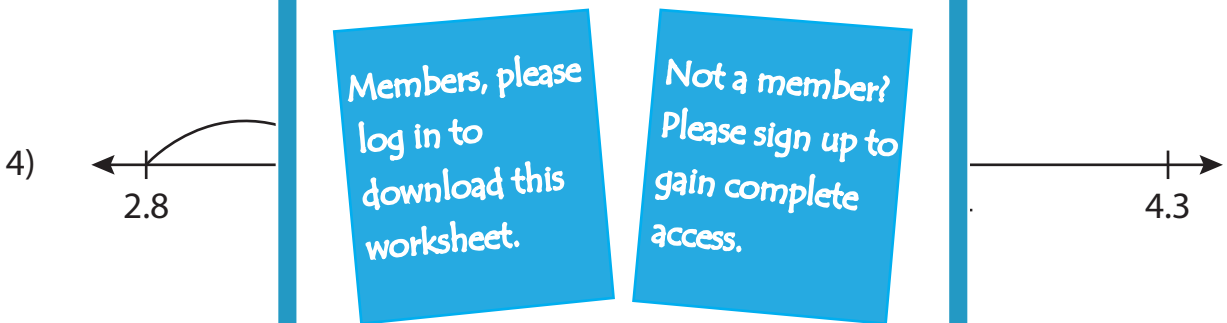
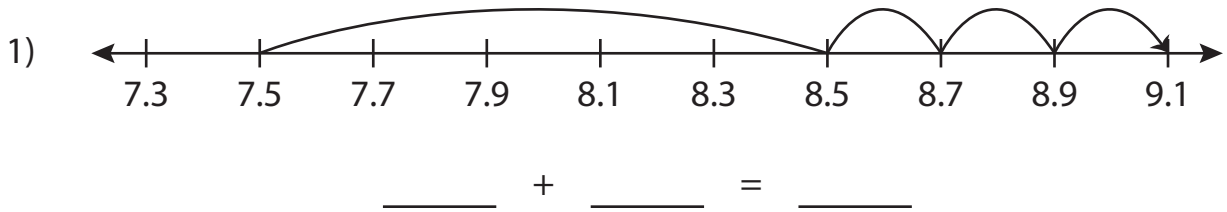


Name : _____

Addition Sentence

Tenth: S2

Write the addition sentence that describes each model.



PREVIEW

Gain complete access to the largest collection of worksheets in all subjects!

Members, please log in to download this worksheet.

Not a member? Please sign up to gain complete access.

www.mathworksheets4kids.com

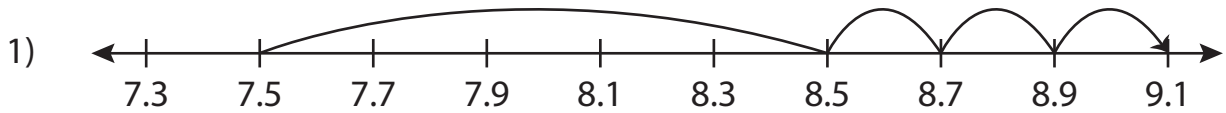
Name : _____

Answer key

Addition Sentence

Tenth: S2

Write the addition sentence that describes each model.



$$\underline{7.5} + \underline{1.6} = \underline{9.1}$$



$$\underline{13.1} + \underline{4} = \underline{17.1}$$



$$\underline{8.3} + \underline{0.5} = \underline{8.8}$$

PREVIEW

Gain complete access to the largest collection of worksheets in all subjects!

Members, please log in to download this worksheet.

Not a member? Please sign up to gain complete access.

www.mathworksheets4kids.com