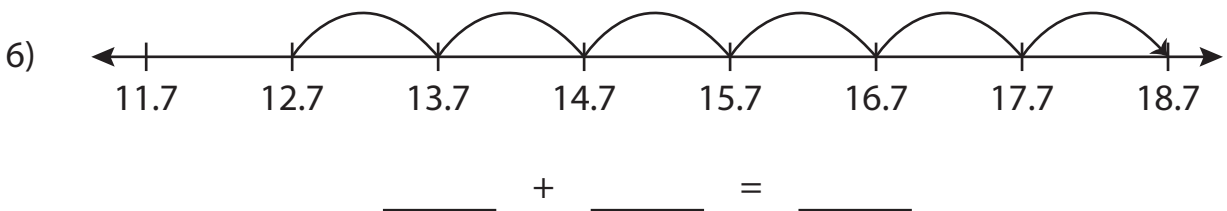
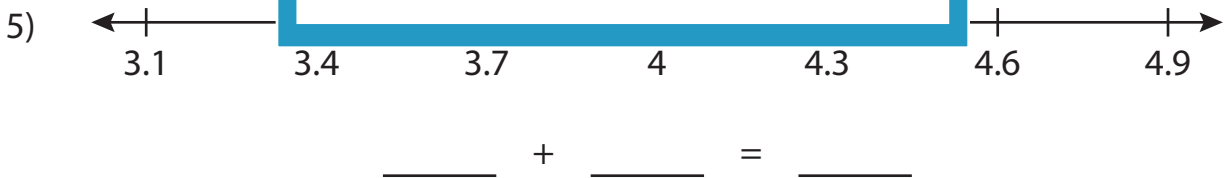
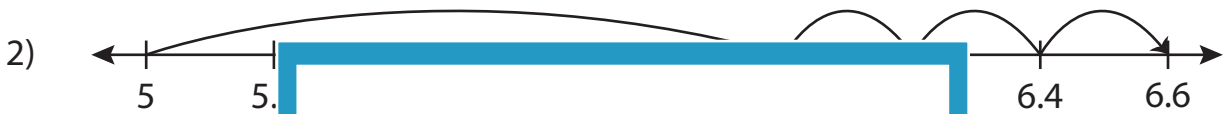
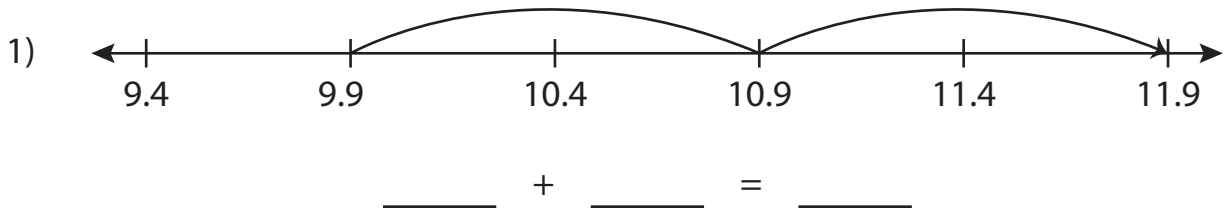


Name : _____

Addition Sentence

Tenth: S3

Write the addition sentence that describes each model.



PREVIEW

Gain complete access to the largest collection of worksheets in all subjects!

Members, please log in to download this worksheet.

Not a member? Please sign up to gain complete access.

www.mathworksheets4kids.com

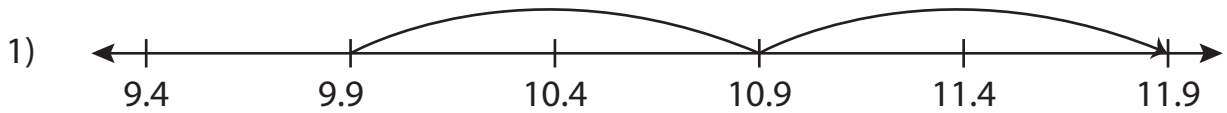
Name : _____

Answer key

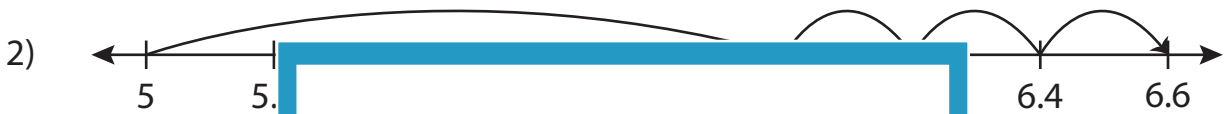
Addition Sentence

Tenth: S3

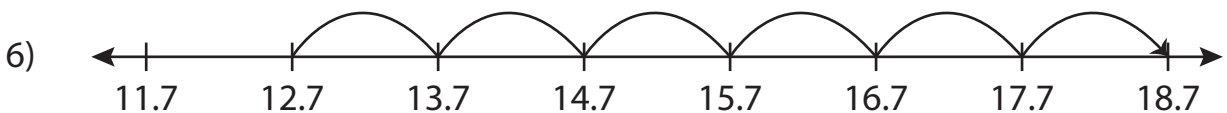
Write the addition sentence that describes each model.



$$\underline{9.9} + \underline{2} = \underline{11.9}$$



$$\underline{3.4} + \underline{0.6} = \underline{4}$$



$$\underline{12.7} + \underline{6} = \underline{18.7}$$

PREVIEW

Gain complete access to the largest collection of worksheets in all subjects!

Members, please log in to download this worksheet.

Not a member? Please sign up to gain complete access.

www.mathworksheets4kids.com