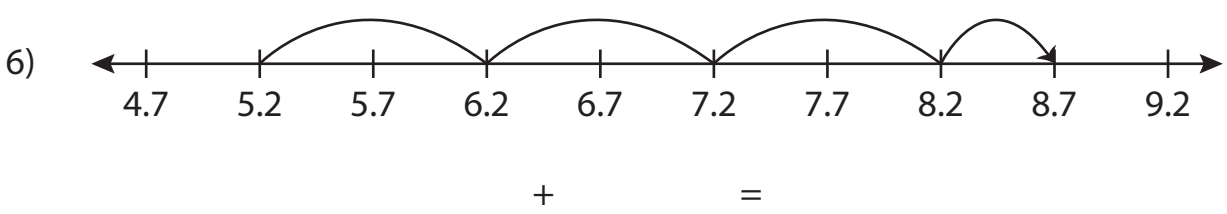

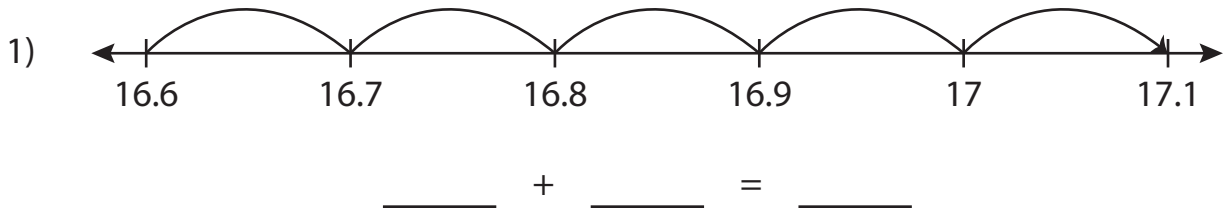


Name : \_\_\_\_\_

# Addition Sentence

Tenth: S5

Write the addition sentence that describes each model.



**PREVIEW**

Gain complete access to the largest collection of worksheets in all subjects!

Members, please log in to download this worksheet.

Not a member? Please sign up to gain complete access.

[www.mathworksheets4kids.com](http://www.mathworksheets4kids.com)

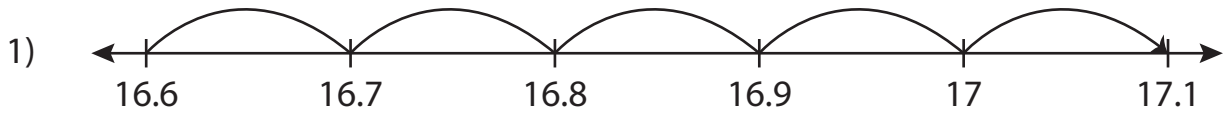
Name : \_\_\_\_\_

## Answer key

# Addition Sentence

Tenth: S5

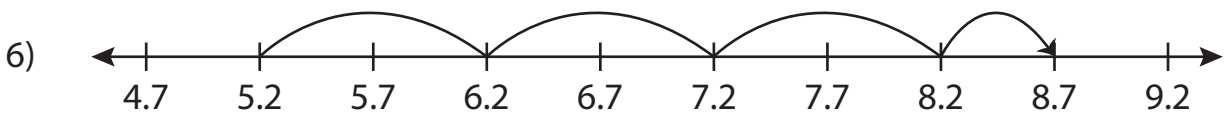
Write the addition sentence that describes each model.



$$\underline{16.6} + \underline{0.5} = \underline{17.1}$$



$$\underline{1.1} + \underline{1.4} = \underline{2.5}$$



$$\underline{5.2} + \underline{3.5} = \underline{8.7}$$

**PREVIEW**

Gain complete access to the largest collection of worksheets in all subjects!

Members, please log in to download this worksheet.

Not a member? Please sign up to gain complete access.

[www.mathworksheets4kids.com](http://www.mathworksheets4kids.com)