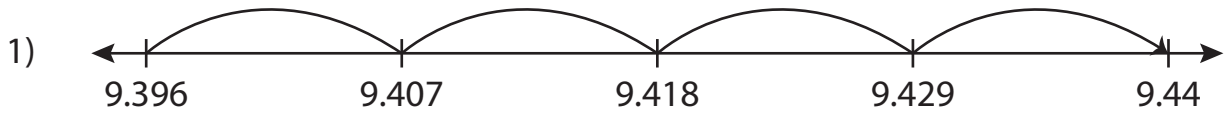


Name : _____

Addition Sentence

Thousandth: S2

Write the addition sentence that describes each model.



_____ + _____ = _____



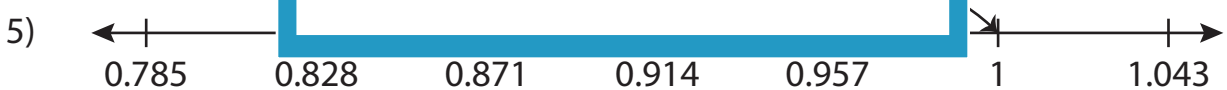
_____ + _____ = _____



_____ + _____ = _____



_____ + _____ = _____



_____ + _____ = _____



_____ + _____ = _____

PREVIEW

Gain complete access to the largest collection of worksheets in all subjects!

Members, please log in to download this worksheet.

Not a member? Please sign up to gain complete access.

www.mathworksheets4kids.com

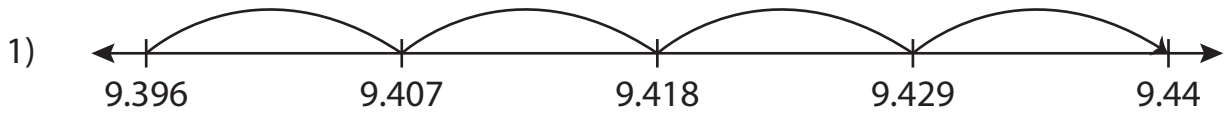
Name : _____

Answer key

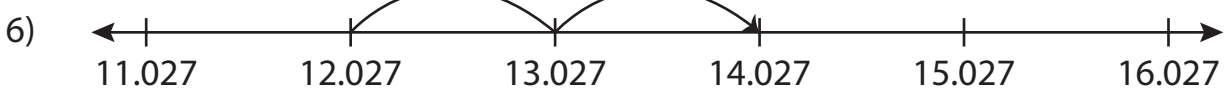
Addition Sentence

Thousandth: S2

Write the addition sentence that describes each model.



$$\underline{9.396} + \underline{0.044} = \underline{9.44}$$



$$\underline{12.027} + \underline{2} = \underline{14.027}$$

PREVIEW

Gain complete access to the largest collection of worksheets in all subjects!

Members, please log in to download this worksheet.

Not a member? Please sign up to gain complete access.

www.mathworksheets4kids.com