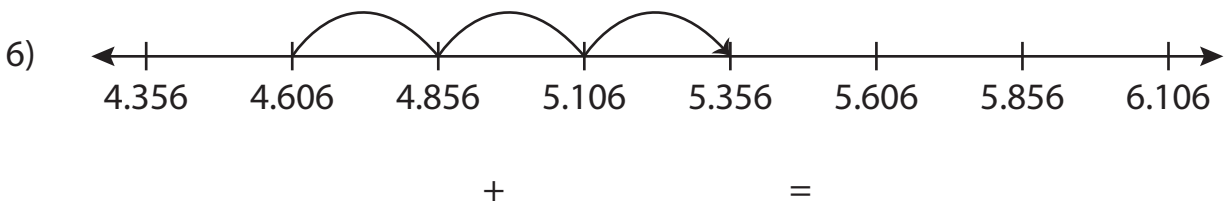
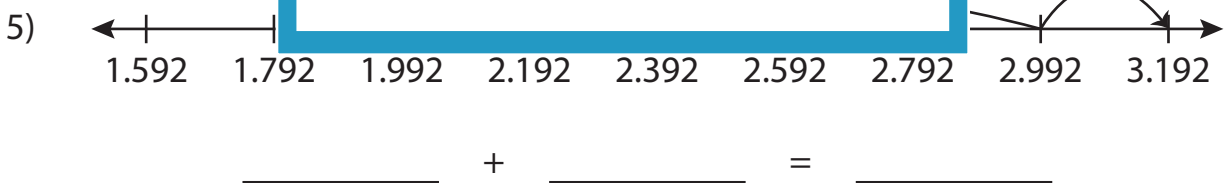
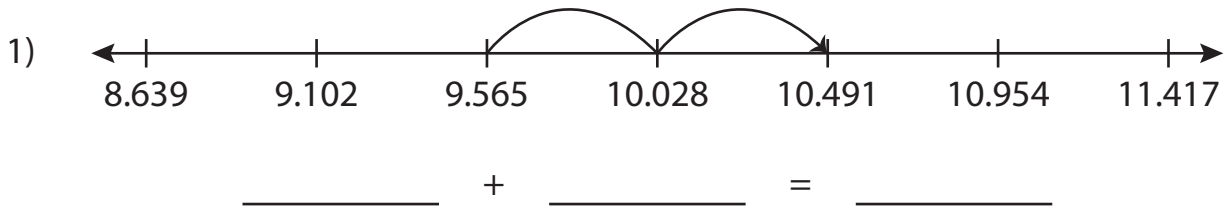


Name : \_\_\_\_\_

# Addition Sentence

Thousandth: S3

Write the addition sentence that describes each model.



**PREVIEW**

Gain complete access to the largest collection of worksheets in all subjects!

Members, please log in to download this worksheet.

Not a member? Please sign up to gain complete access.

[www.mathworksheets4kids.com](http://www.mathworksheets4kids.com)

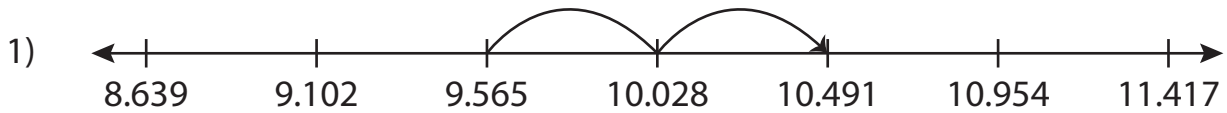
Name : \_\_\_\_\_

## Answer key

# Addition Sentence

Thousandth: S3

Write the addition sentence that describes each model.



$$\underline{9.565} + \underline{0.926} = \underline{10.491}$$



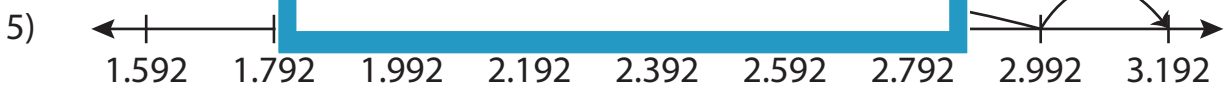
$$\underline{0.5}$$



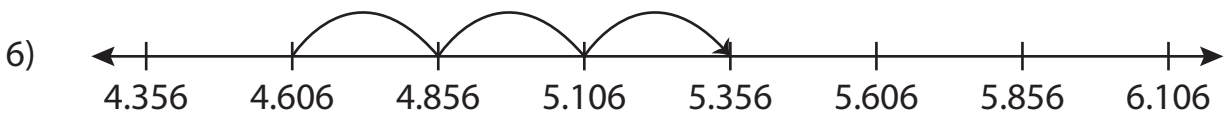
$$\underline{0.2}$$



$$\underline{0.537}$$



$$\underline{1.992} + \underline{1.2} = \underline{3.192}$$



$$\underline{4.606} + \underline{0.75} = \underline{5.356}$$

**PREVIEW**

Gain complete access to the largest collection of worksheets in all subjects!

Members, please log in to download this worksheet.

Not a member? Please sign up to gain complete access.

[www.mathworksheets4kids.com](http://www.mathworksheets4kids.com)