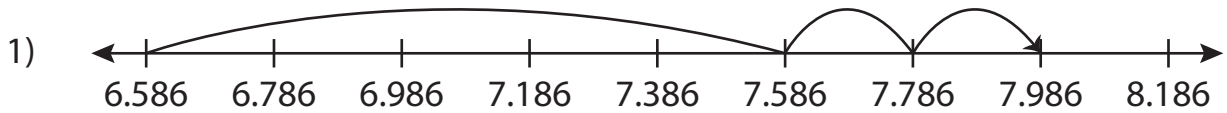


Name : _____

Addition Sentence

Thousandth: S4

Write the addition sentence that describes each model.



_____ + _____ = _____



_____ + _____ = _____



_____ + _____ = _____

PREVIEW

Gain complete access to the largest collection of worksheets in all subjects!

Members, please log in to download this worksheet.

Not a member? Please sign up to gain complete access.

www.mathworksheets4kids.com

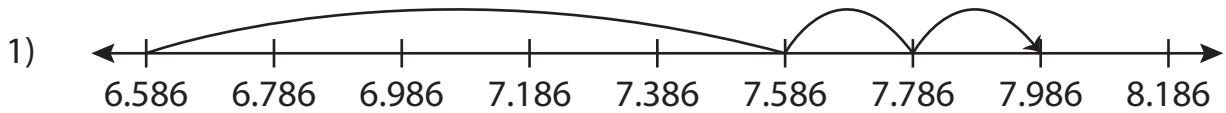
Name : _____

Answer key

Addition Sentence

Thousandth: S4

Write the addition sentence that describes each model.



$$\underline{6.586} + \underline{1.4} = \underline{7.986}$$



PREVIEW

Gain complete access to the largest collection of worksheets in all subjects!

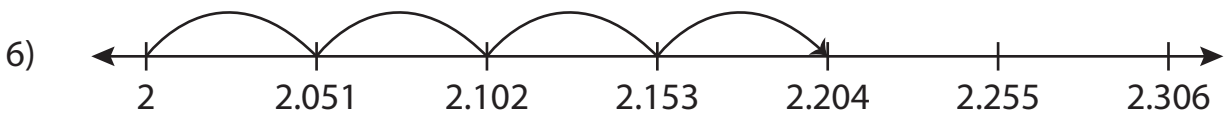
Members, please log in to download this worksheet.

Not a member? Please sign up to gain complete access.

www.mathworksheets4kids.com



$$\underline{5.645} + \underline{1.25} = \underline{6.895}$$



$$\underline{2} + \underline{0.204} = \underline{2.204}$$