

Name : _____

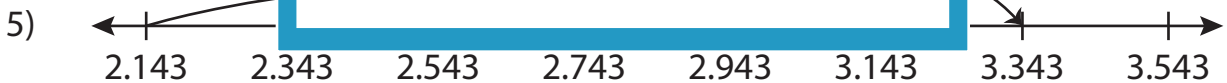
Addition Sentence

Thousandth: S5

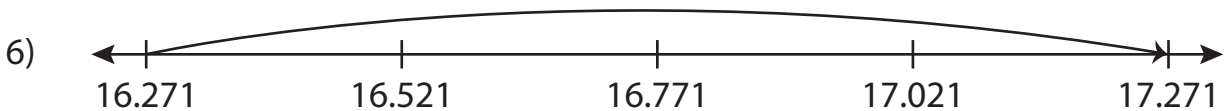
Write the addition sentence that describes each model.



_____ + _____ = _____



_____ + _____ = _____



_____ + _____ = _____

PREVIEW

Gain complete access to the largest collection of worksheets in all subjects!

Members, please log in to download this worksheet.

Not a member? Please sign up to gain complete access.

www.mathworksheets4kids.com

Name : _____

Answer key

Addition Sentence

Thousandth: S5

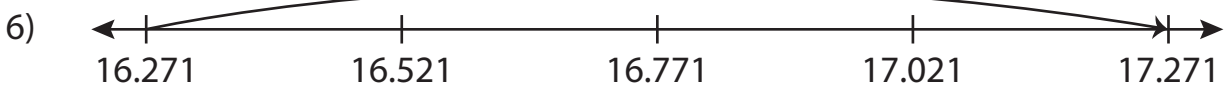
Write the addition sentence that describes each model.



$$\underline{9} + \underline{0.196} = \underline{9.196}$$



$$\underline{2.143} + \underline{1.2} = \underline{3.343}$$



$$\underline{16.271} + \underline{1} = \underline{17.271}$$

PREVIEW

Gain complete access to the largest collection of worksheets in all subjects!

Members, please log in to download this worksheet.

Not a member? Please sign up to gain complete access.

www.mathworksheets4kids.com