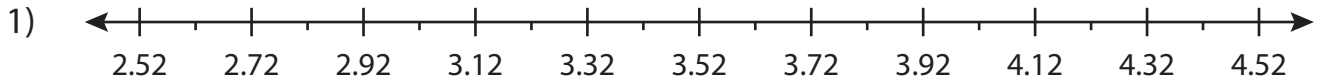


Name : \_\_\_\_\_

# Decimal Addition

Hundredth: S5

Solve using number line.



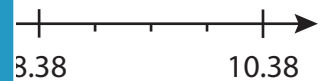
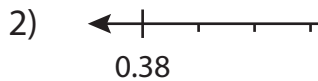
a)  $4.02 + 0.3 = \underline{\hspace{2cm}}$

b)  $2.52 + 2 = \underline{\hspace{2cm}}$

c)  $2.72 + 1. = \underline{\hspace{2cm}}$

e)  $3.92 + 0. = \underline{\hspace{2cm}}$

g)  $2.82 + 0. = \underline{\hspace{2cm}}$



a) 
$$\begin{array}{r} 4.38 \\ + 1.50 \\ \hline \end{array}$$

d) 
$$\begin{array}{r} 1.88 \\ + 5.50 \\ \hline \end{array}$$

e) 
$$\begin{array}{r} 3.38 \\ + 6.00 \\ \hline \end{array}$$

f) 
$$\begin{array}{r} 0.88 \\ + 4.50 \\ \hline \end{array}$$

g) 
$$\begin{array}{r} 0.88 \\ + 2.00 \\ \hline \end{array}$$

h) 
$$\begin{array}{r} 7.38 \\ + 3.00 \\ \hline \end{array}$$

i) 
$$\begin{array}{r} 1.38 \\ + 3.50 \\ \hline \end{array}$$

j) 
$$\begin{array}{r} 8.38 \\ + 1.00 \\ \hline \end{array}$$

k) 
$$\begin{array}{r} 4.88 \\ + 5.00 \\ \hline \end{array}$$

l) 
$$\begin{array}{r} 5.88 \\ + 2.50 \\ \hline \end{array}$$

**PREVIEW**

Gain complete access to the largest collection of worksheets in all subjects!

Members, please log in to download this worksheet.

Not a member? Please sign up to gain complete access.

[www.mathworksheets4kids.com](http://www.mathworksheets4kids.com)

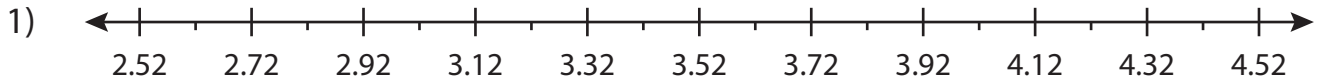
Name : \_\_\_\_\_

## Answer key

# Decimal Addition

Hundredth: S5

Solve using number line.



a)  $4.02 + 0.3 = \underline{4.32}$

b)  $2.52 + 2 = \underline{4.52}$

c)  $2.72 + 1.6 = \underline{4.32}$

e)  $3.92 + 0.9 = \underline{2.82}$

g)  $2.82 + 0.6 = \underline{4.42}$



a) 
$$\begin{array}{r} 4.38 \\ + 1.50 \\ \hline 5.88 \end{array}$$

d) 
$$\begin{array}{r} 1.88 \\ + 5.50 \\ \hline 7.38 \end{array}$$

e) 
$$\begin{array}{r} 3.38 \\ + 6.00 \\ \hline 9.38 \end{array}$$

f) 
$$\begin{array}{r} 0.88 \\ + 4.50 \\ \hline 5.38 \end{array}$$

g) 
$$\begin{array}{r} 0.88 \\ + 2.00 \\ \hline 8.88 \end{array}$$

h) 
$$\begin{array}{r} 7.38 \\ + 3.00 \\ \hline 10.38 \end{array}$$

i) 
$$\begin{array}{r} 1.38 \\ + 3.50 \\ \hline 4.88 \end{array}$$

j) 
$$\begin{array}{r} 8.38 \\ + 1.00 \\ \hline 9.38 \end{array}$$

k) 
$$\begin{array}{r} 4.88 \\ + 5.00 \\ \hline 9.88 \end{array}$$

l) 
$$\begin{array}{r} 5.88 \\ + 2.50 \\ \hline 8.38 \end{array}$$

**PREVIEW**

Gain complete access to the largest collection of worksheets in all subjects!

Members, please log in to download this worksheet.

Not a member? Please sign up to gain complete access.

[www.mathworksheets4kids.com](http://www.mathworksheets4kids.com)