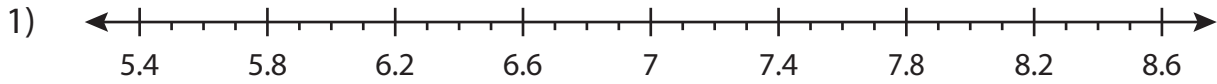


Name : _____

Decimal Addition

Tenth: S1

Solve using number line.



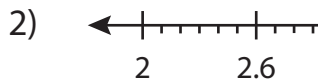
a) $6.7 + 1.2 = \underline{\hspace{2cm}}$

b) $8 + 0.6 = \underline{\hspace{2cm}}$

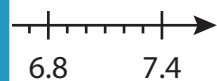
c) $5.5 + 0. \underline{\hspace{1cm}} = \underline{\hspace{2cm}}$

e) $7.4 + 1 \underline{\hspace{1cm}} = \underline{\hspace{2cm}}$

g) $5.6 + 1 \underline{\hspace{1cm}} = \underline{\hspace{2cm}}$



a)
$$\begin{array}{r} 3.7 \\ + 1.2 \\ \hline \end{array}$$



d)
$$\begin{array}{r} 4.3 \\ + 2.3 \\ \hline \end{array}$$

e)
$$\begin{array}{r} 2.2 \\ + 5.1 \\ \hline \end{array}$$

f)
$$\begin{array}{r} 4.8 \\ + 1.3 \\ \hline \end{array}$$

g)
$$\begin{array}{r} 5.9 \\ + 3.5 \\ \hline \end{array}$$

h)
$$\begin{array}{r} 6.5 \\ + 0.4 \\ \hline \end{array}$$

i)
$$\begin{array}{r} 4.5 \\ + 0.9 \\ \hline \end{array}$$

j)
$$\begin{array}{r} 3.4 \\ + 2.5 \\ \hline \end{array}$$

k)
$$\begin{array}{r} 2.6 \\ + 4.2 \\ \hline \end{array}$$

l)
$$\begin{array}{r} 5.2 \\ + 1.8 \\ \hline \end{array}$$

PREVIEW

Gain complete access to the largest collection of worksheets in all subjects!

Members, please log in to download this worksheet.

Not a member? Please sign up to gain complete access.

www.mathworksheets4kids.com

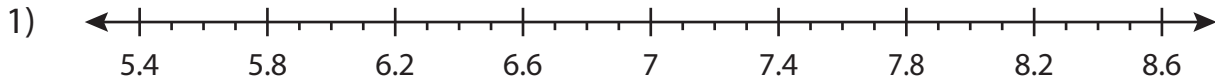
Name : _____

Answer key

Decimal Addition

Tenth: S1

Solve using number line.



a) $6.7 + 1.2 = \underline{7.9}$

b) $8 + 0.6 = \underline{8.6}$

c) $5.5 + 0.5 = \underline{8}$

e) $7.4 + 0.9 = \underline{8.3}$

g) $5.6 + 2.1 = \underline{7.7}$



a)
$$\begin{array}{r} 3.7 \\ + 1.2 \\ \hline 4.9 \end{array}$$

d)
$$\begin{array}{r} 4.3 \\ + 2.3 \\ \hline 6.6 \end{array}$$

e)
$$\begin{array}{r} 2.2 \\ + 5.1 \\ \hline 7.3 \end{array}$$

f)
$$\begin{array}{r} 4.8 \\ + 1.3 \\ \hline 6.1 \end{array}$$

g)
$$\begin{array}{r} 3.9 \\ + 3.5 \\ \hline 7.4 \end{array}$$

h)
$$\begin{array}{r} 6.5 \\ + 0.4 \\ \hline 6.9 \end{array}$$

i)
$$\begin{array}{r} 4.5 \\ + 0.9 \\ \hline 5.4 \end{array}$$

j)
$$\begin{array}{r} 3.4 \\ + 2.5 \\ \hline 5.9 \end{array}$$

k)
$$\begin{array}{r} 2.6 \\ + 4.2 \\ \hline 6.8 \end{array}$$

l)
$$\begin{array}{r} 5.2 \\ + 1.8 \\ \hline 7.0 \end{array}$$

PREVIEW

Gain complete access to the largest collection of worksheets in all subjects!

Members, please log in to download this worksheet.

Not a member? Please sign up to gain complete access.

www.mathworksheets4kids.com