

Name : _____

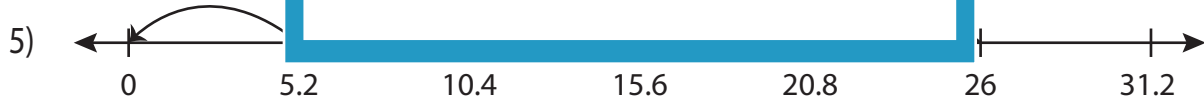
Division Sentence

Sheet 4

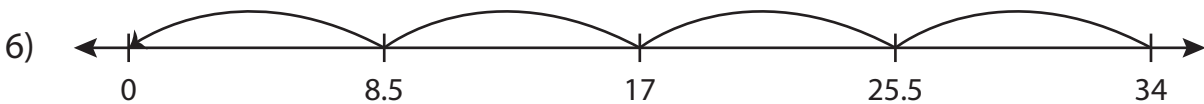
Write the division sentence that describes each model.



$$\underline{\quad} \div \underline{\quad} = \underline{\quad}$$



$$\underline{\quad} \div \underline{\quad} = \underline{\quad}$$



$$\underline{\quad} \div \underline{\quad} = \underline{\quad}$$

PREVIEW

Access the largest collection of worksheets for just **\$19.95** per year!

Members, please log in to download this worksheet. **Log in**

Not a member? Please sign up to gain complete access. **Sign up**

www.mathworksheets4kids.com

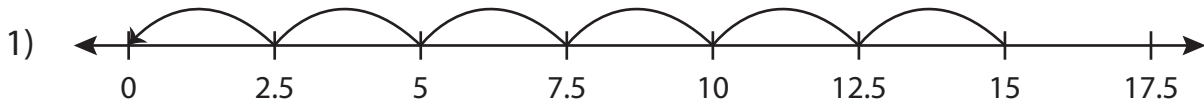
Name : _____

Answer key

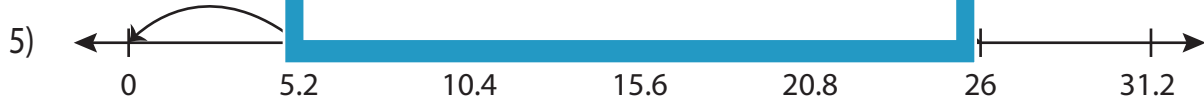
Division Sentence

Sheet 4

Write the division sentence that describes each model.



$$\underline{15} \div \underline{2.5} = \underline{6}$$



$$\underline{26} \div \underline{5.2} = \underline{5}$$



$$\underline{34} \div \underline{8.5} = \underline{4}$$

PREVIEW

Access the largest collection of worksheets for just **\$19.95** per year!

Members, please log in to download this worksheet. **Log in**

Not a member? Please sign up to gain complete access. **Sign up**

www.mathworksheets4kids.com