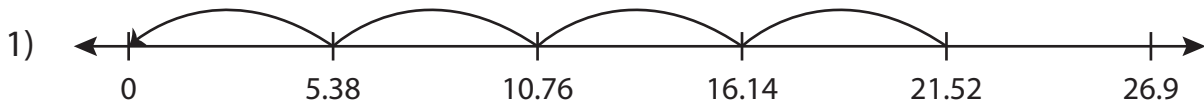


Name : _____

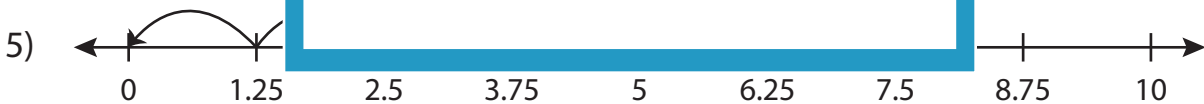
Division Sentence

Hundredth: S1

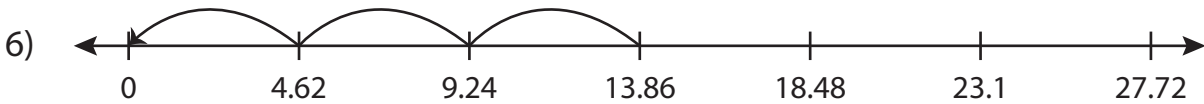
Write the division sentence that describes each model.



$$\underline{\hspace{2cm}} \div \underline{\hspace{2cm}} = \underline{\hspace{2cm}}$$



$$\underline{\hspace{2cm}} \div \underline{\hspace{2cm}} = \underline{\hspace{2cm}}$$



$$\underline{\hspace{2cm}} \div \underline{\hspace{2cm}} = \underline{\hspace{2cm}}$$

PREVIEW

Access the largest collection of
worksheets for just **\$19.95** per year!

Members, please
log in to
download this
worksheet.

Log in

Not a member?
Please sign up to
gain complete
access.

Sign up

www.mathworksheets4kids.com

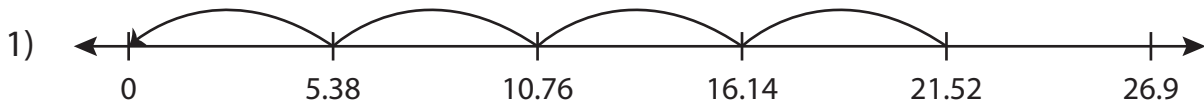
Name : _____

Answer key

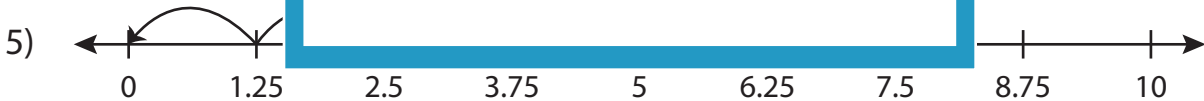
Division Sentence

Hundredth: S1

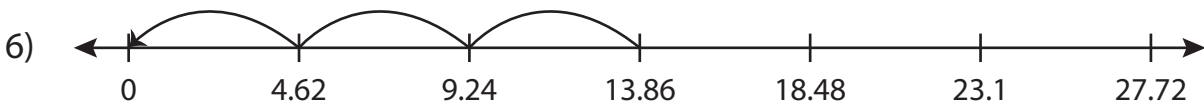
Write the division sentence that describes each model.



$$\underline{21.52} \div \underline{5.38} = \underline{4}$$



$$\underline{7.5} \div \underline{1.25} = \underline{6}$$



$$\underline{13.86} \div \underline{4.62} = \underline{3}$$

PREVIEW

Access the largest collection of worksheets for just **\$19.95** per year!

Members, please log in to download this worksheet. **Log in**

Not a member? Please sign up to gain complete access. **Sign up**

www.mathworksheets4kids.com