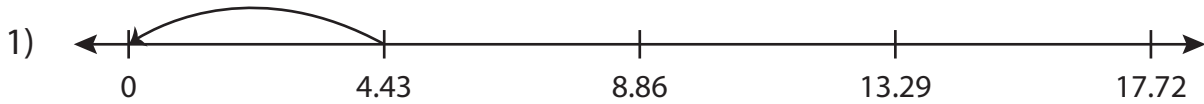


Name : \_\_\_\_\_

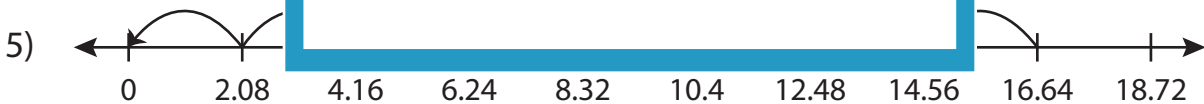
## Division Sentence

Hundredth: S3

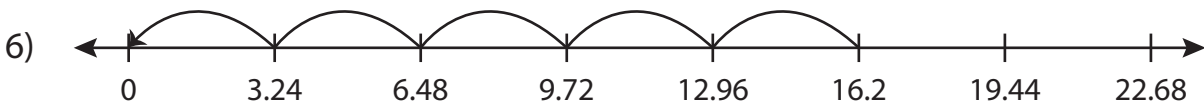
Write the division sentence that describes each model.



$$\underline{\quad\quad} \div \underline{\quad\quad} = \underline{\quad\quad}$$



$$\underline{\quad\quad} \div \underline{\quad\quad} = \underline{\quad\quad}$$



$$\underline{\quad\quad} \div \underline{\quad\quad} = \underline{\quad\quad}$$

# PREVIEW

Access the largest collection of  
worksheets for just **\$19.95** per year!

Members, please  
log in to  
download this  
worksheet.

Log in

Not a member?  
Please sign up to  
gain complete  
access.

Sign up

[www.mathworksheets4kids.com](http://www.mathworksheets4kids.com)

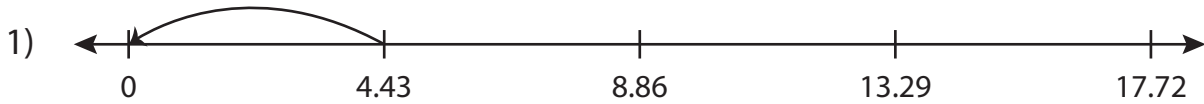
Name : \_\_\_\_\_

## Answer key

### Division Sentence

Hundredth: S3

Write the division sentence that describes each model.



$$\underline{4.43} \div \underline{4.43} = \underline{1}$$



# PREVIEW

Access the largest collection of worksheets for just **\$19.95** per year!

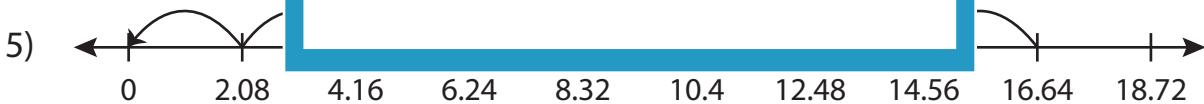
Members, please log in to download this worksheet.

**Log in**

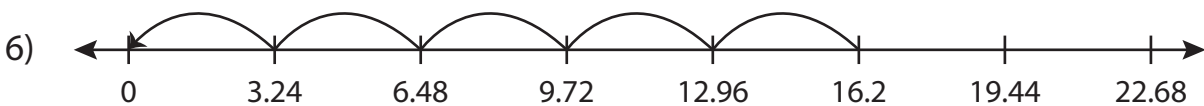
Not a member? Please sign up to gain complete access.

**Sign up**

[www.mathworksheets4kids.com](http://www.mathworksheets4kids.com)



$$\underline{16.64} \div \underline{2.08} = \underline{8}$$



$$\underline{16.2} \div \underline{3.24} = \underline{5}$$