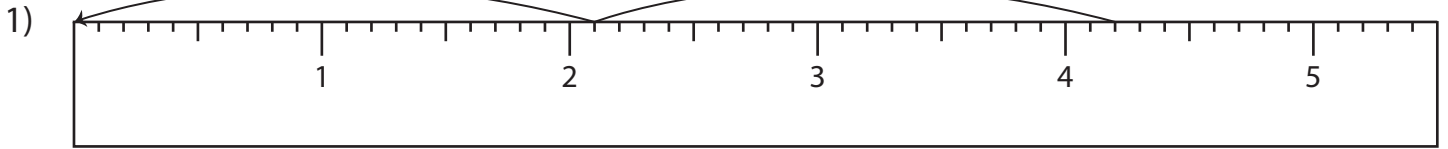


Name : \_\_\_\_\_

# Division Sentence - Ruler

Sheet 1

Read each ruler and write the division sentences.



$$\underline{\quad} \div \underline{\quad} = \underline{\quad}$$



# PREVIEW

Gain complete access to the largest collection of worksheets in all subjects!

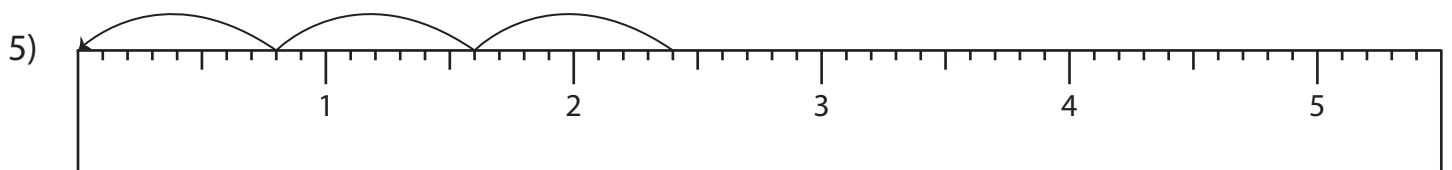
Members, please log in to download this worksheet.

Not a member? Please sign up to gain complete access.

[www.mathworksheets4kids.com](http://www.mathworksheets4kids.com)



$$\underline{\quad} \div \underline{\quad} = \underline{\quad}$$



$$\underline{\quad} \div \underline{\quad} = \underline{\quad}$$

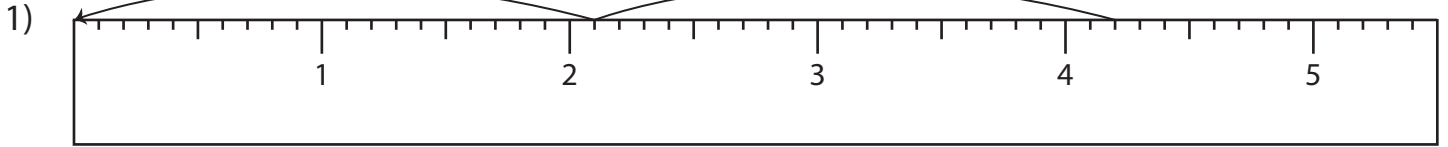
Name : \_\_\_\_\_

## Answer key

# Division Sentence - Ruler

Sheet 1

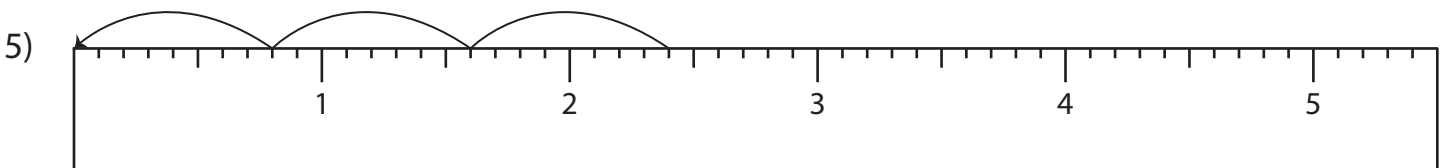
Read each ruler and write the division sentences.



$$\underline{4.2} \div \underline{2.1} = \underline{2}$$



$$\underline{1.2} \div \underline{0.6} = \underline{2}$$



$$\underline{2.4} \div \underline{0.8} = \underline{3}$$

# PREVIEW

Gain complete access to the largest collection of worksheets in all subjects!

Members, please log in to download this worksheet.

Not a member? Please sign up to gain complete access.

[www.mathworksheets4kids.com](http://www.mathworksheets4kids.com)