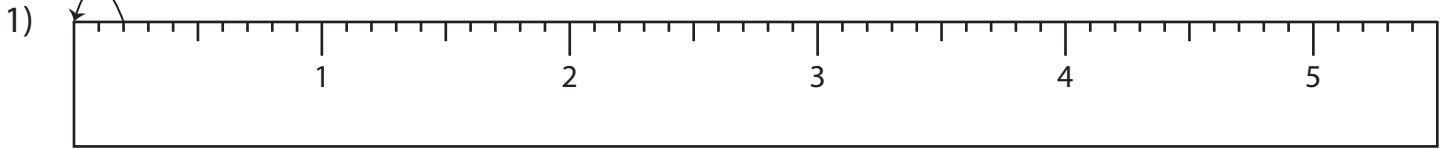


Name : _____

Division Sentence - Ruler

Sheet 2

Read each ruler and write the division sentences.



_____ ÷ _____ = _____



PREVIEW

Access the largest collection of worksheets for just **\$19.95** per year!

Members, please log in to download this worksheet.

Log in

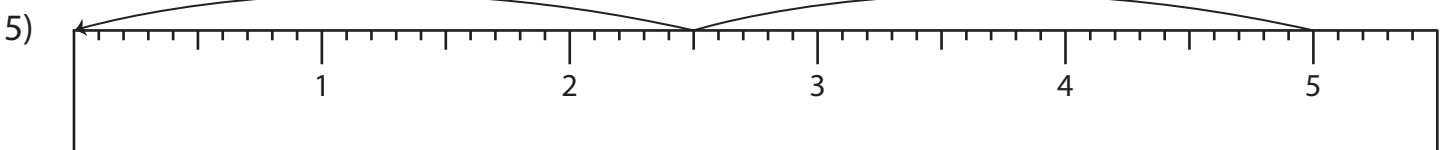
Not a member? Please sign up to gain complete access.

Sign up

www.mathworksheets4kids.com



_____ ÷ _____ = _____



_____ ÷ _____ = _____

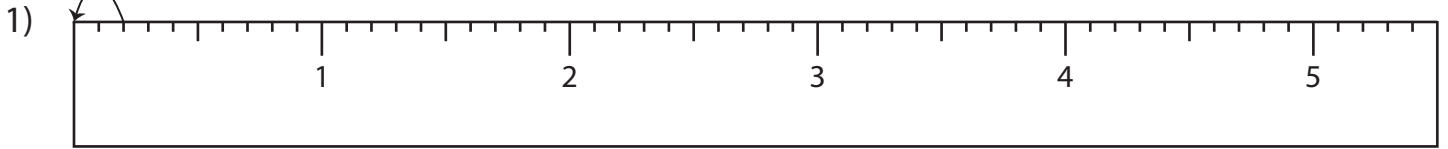
Name : _____

Answer key

Division Sentence - Ruler

Sheet 2

Read each ruler and write the division sentences.



$$\underline{0.2} \div \underline{0.2} = \underline{1}$$



PREVIEW

Access the largest collection of worksheets for just **\$19.95** per year!

Members, please log in to download this worksheet.

Log in

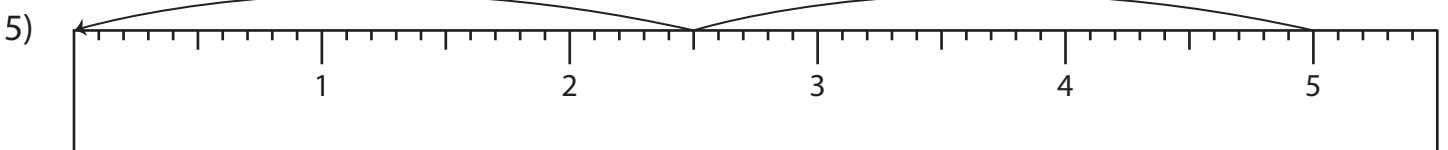
Not a member? Please sign up to gain complete access.

Sign up

www.mathworksheets4kids.com



$$\underline{4.4} \div \underline{0.4} = \underline{11}$$



$$\underline{5} \div \underline{2.5} = \underline{2}$$