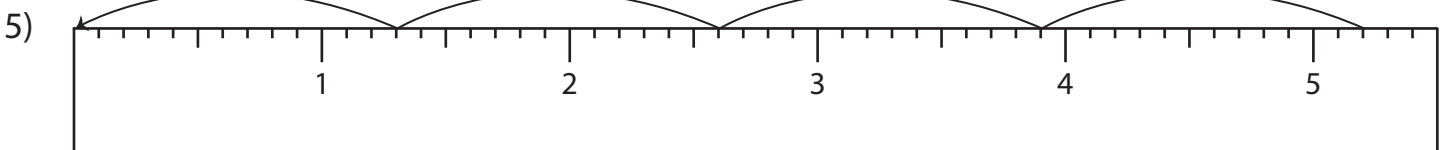
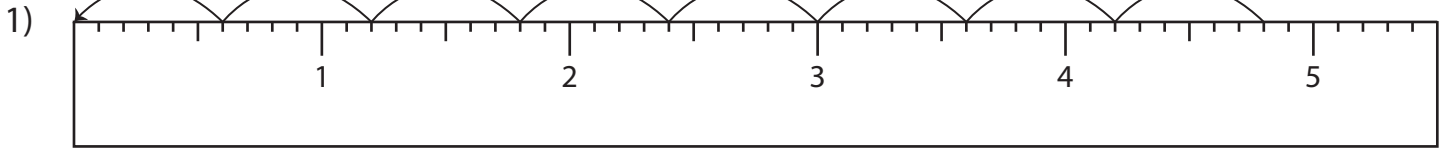


Name : \_\_\_\_\_

# Division Sentence - Ruler

Sheet 3

Read each ruler and write the division sentences.



**PREVIEW**

Access the largest collection of worksheets for just **\$19.95** per year!

Members, please log in to download this worksheet. **Log in**

Not a member? Please sign up to gain complete access. **Sign up**

[www.mathworksheets4kids.com](http://www.mathworksheets4kids.com)

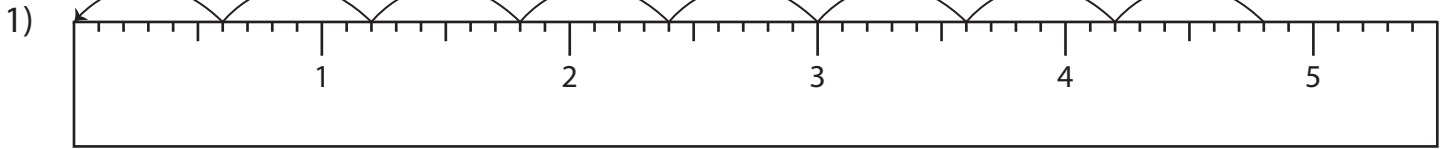
Name : \_\_\_\_\_

## Answer key

# Division Sentence - Ruler

Sheet 3

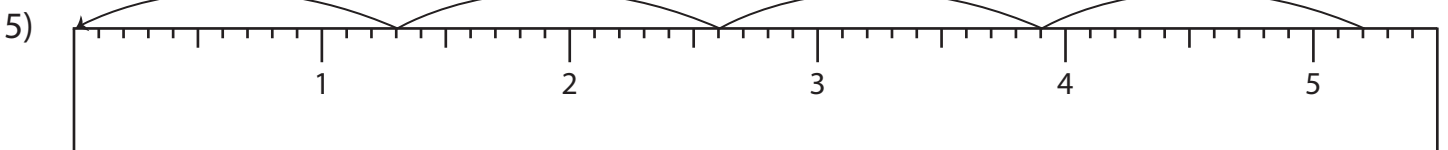
Read each ruler and write the division sentences.



$$\underline{4.8} \div \underline{0.6} = \underline{8}$$



$$\underline{0.9} \div \underline{0.9} = \underline{1}$$



$$\underline{5.2} \div \underline{1.3} = \underline{4}$$

**PREVIEW**

Access the largest collection of worksheets for just **\$19.95** per year!

Members, please log in to download this worksheet.

Not a member? Please sign up to gain complete access.

[www.mathworksheets4kids.com](http://www.mathworksheets4kids.com)