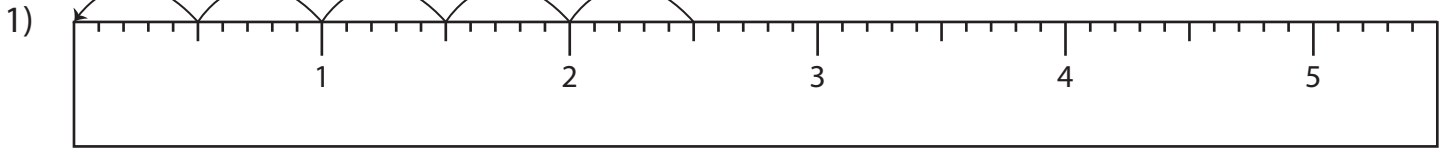


Name : _____

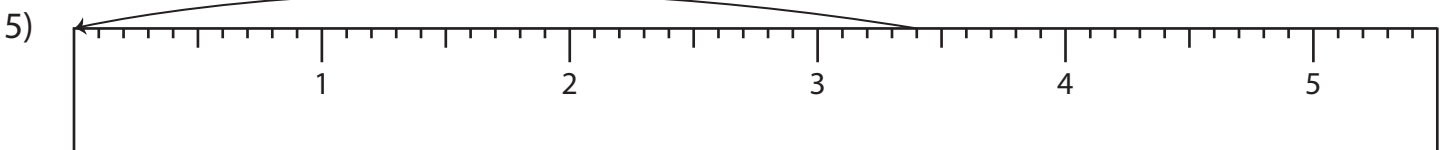
Division Sentence - Ruler

Sheet 4

Read each ruler and write the division sentences.



_____ ÷ _____ = _____



_____ ÷ _____ = _____

PREVIEW

Access the largest collection of worksheets for just **\$19.95** per year!

Members, please log in to download this worksheet.

Not a member? Please sign up to gain complete access.

www.mathworksheets4kids.com

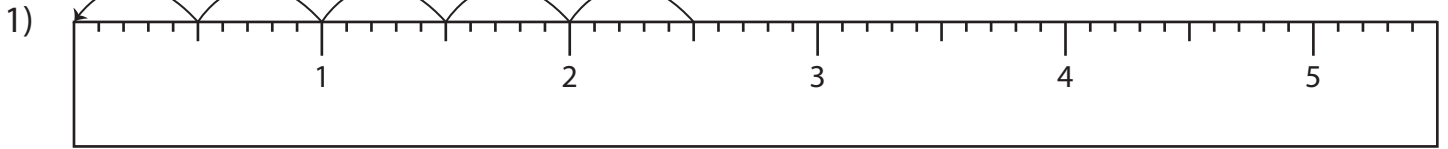
Name : _____

Answer key

Division Sentence - Ruler

Sheet 4

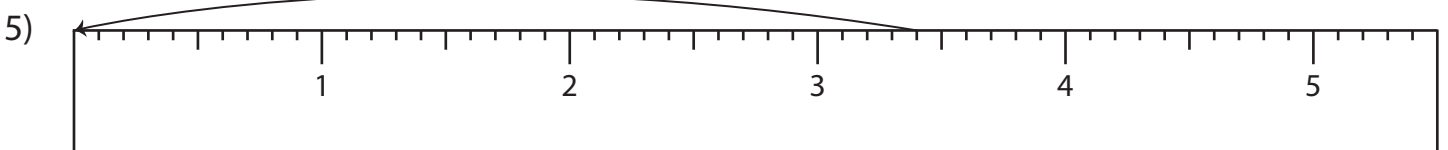
Read each ruler and write the division sentences.



$$\underline{2.5} \div \underline{0.5} = \underline{5}$$



$$\underline{1.6} \div \underline{0.2} = \underline{8}$$



$$\underline{3.4} \div \underline{3.4} = \underline{1}$$

PREVIEW

Access the largest collection of worksheets for just **\$19.95** per year!

Members, please log in to download this worksheet.

Not a member? Please sign up to gain complete access.

www.mathworksheets4kids.com