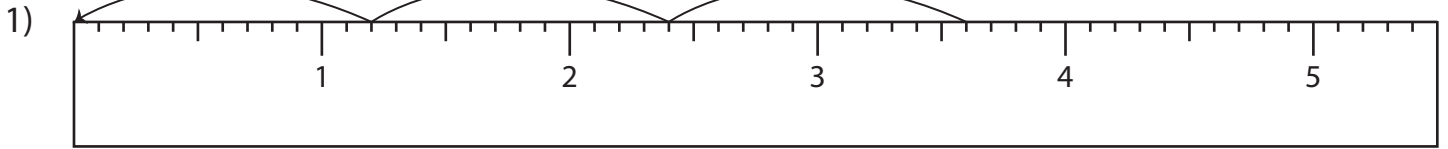


Name : \_\_\_\_\_

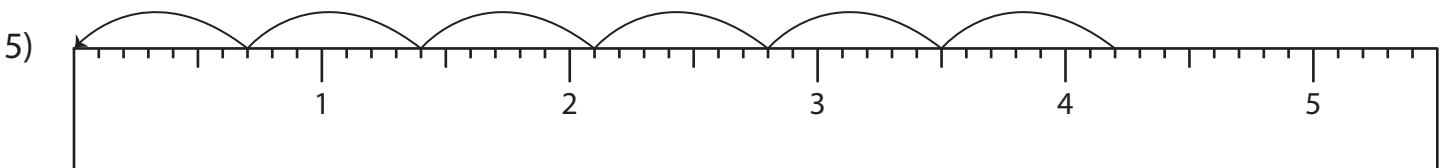
# Division Sentence - Ruler

Sheet 5

Read each ruler and write the division sentences.



\_\_\_\_\_ ÷ \_\_\_\_\_ = \_\_\_\_\_



\_\_\_\_\_ ÷ \_\_\_\_\_ = \_\_\_\_\_

**PREVIEW**

Access the largest collection of worksheets for just **\$19.95** per year!

Members, please log in to download this worksheet.

Not a member? Please sign up to gain complete access.

[www.mathworksheets4kids.com](http://www.mathworksheets4kids.com)

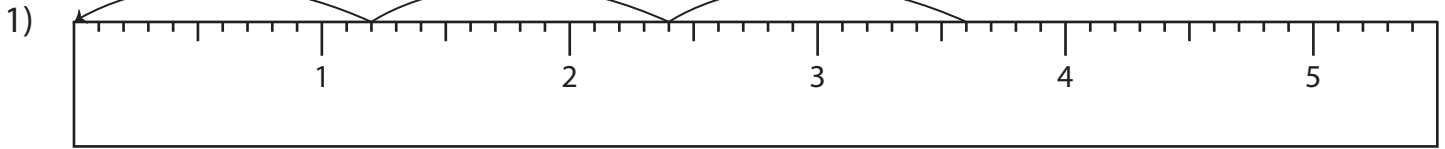
Name : \_\_\_\_\_

## Answer key

# Division Sentence - Ruler

Sheet 5

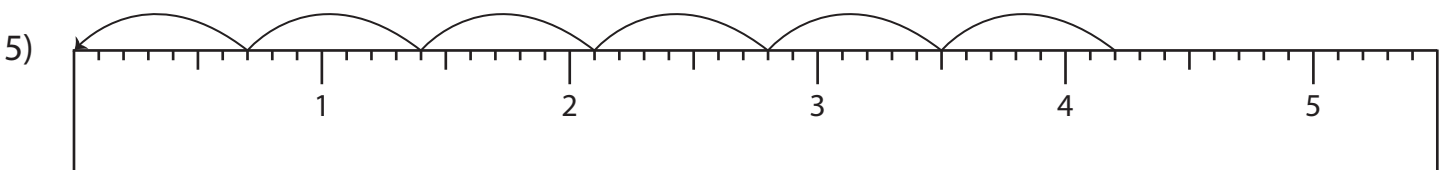
Read each ruler and write the division sentences.



$$\underline{3.6} \div \underline{1.2} = \underline{3}$$



$$\underline{5} \div \underline{0.5} = \underline{10}$$



$$\underline{4.2} \div \underline{0.7} = \underline{6}$$

**PREVIEW**

Access the largest collection of worksheets for just **\$19.95** per year!

Members, please log in to download this worksheet.

Not a member? Please sign up to gain complete access.

[www.mathworksheets4kids.com](http://www.mathworksheets4kids.com)